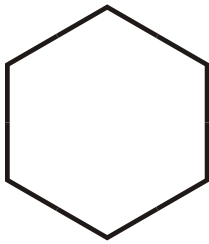


Identifying polygons

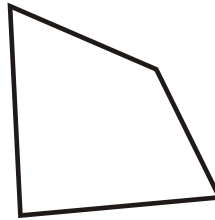
Grade 3 Geometry Worksheet

Classify the polygons as one of: squares, rectangles, irregular quadrilateral, pentagon, irregular pentagon, hexagon or irregular hexagon,

1.



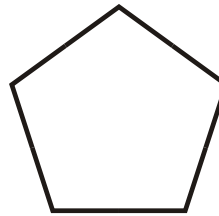
2.




3.



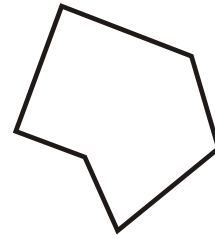
4.




5.



6.



7.



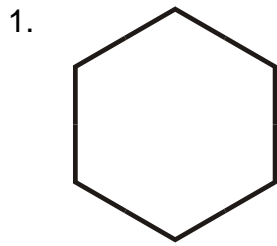
8.




Identifying polygons

Grade 3 Geometry Worksheet

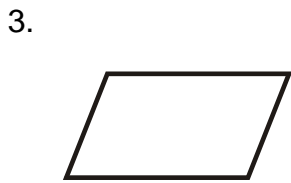
Classify the polygons as one of: squares, rectangles, irregular quadrilateral, pentagon, irregular pentagon, hexagon or irregular hexagon,



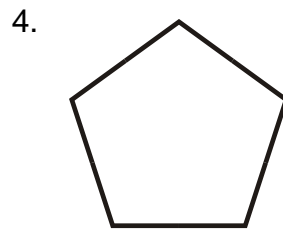
Regular Hexagon




Irregular Quadrilateral



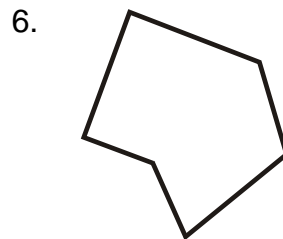
Parallelogram




Regular Pentagon



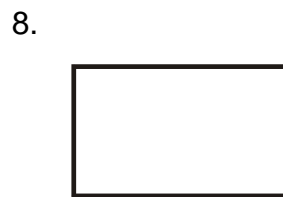
Square



Irregular Hexagon



Irregular Pentagon



Rectangle
