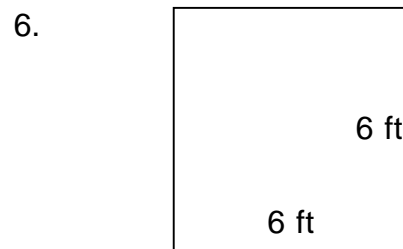
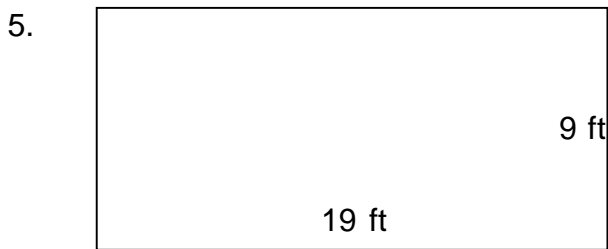
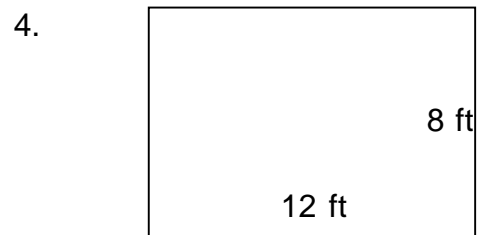
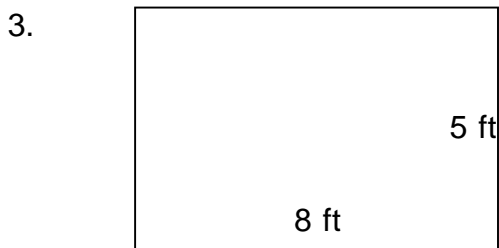


Perimeter of rectangles

Grade 3 Geometry Worksheet


Find the perimeter of each rectangle.



Perimeter of rectangles

Grade 3 Geometry Worksheet

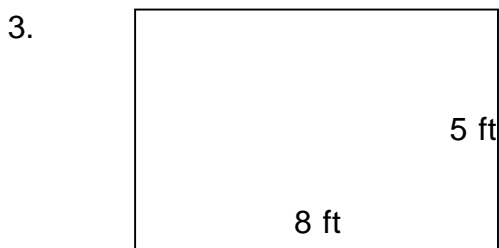
Find the perimeter of each rectangle.



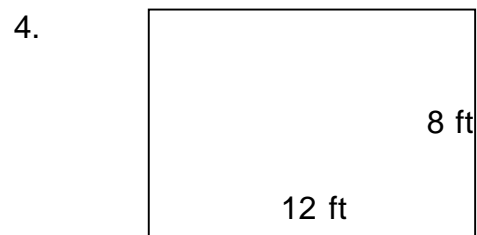
$P = 34 \text{ ft}$



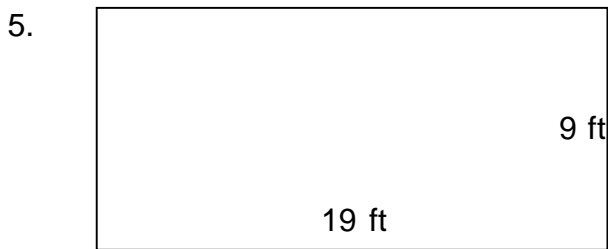
$P = 46 \text{ ft}$



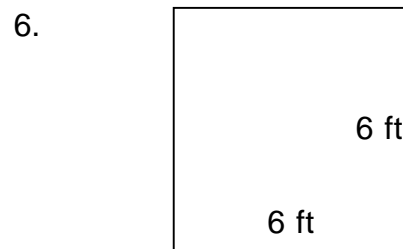
$P = 26 \text{ ft}$



$P = 40 \text{ ft}$



$P = 56 \text{ ft}$



$P = 24 \text{ ft}$



$P = 42 \text{ ft}$



$P = 46 \text{ ft}$
