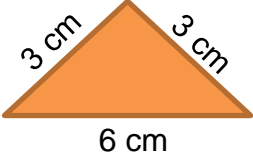
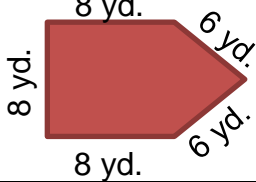
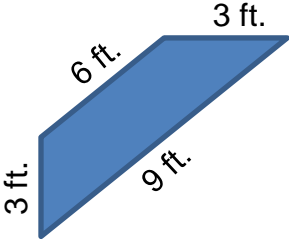
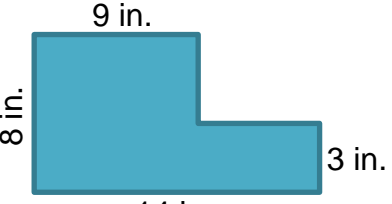
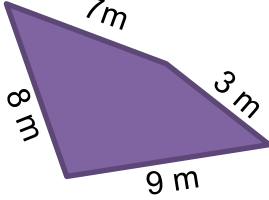
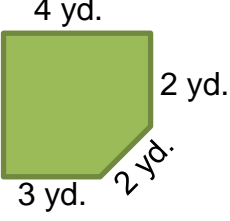
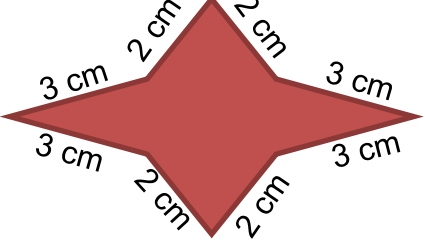
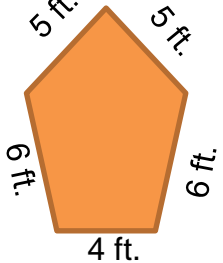


## Perimeters of irregular shapes

### Grade 3 Geometry Worksheet

Find the perimeter for the shapes shown below.

 <p>3 cm 3 cm 6 cm</p>	 <p>8 yd. 8 yd. 8 yd. 6 yd. 6 yd.</p>
<p>_____</p>	<p>_____</p>
 <p>3 ft. 6 ft. 9 ft. 3 ft.</p>	 <p>9 in. 8 in. 14 in. 3 in.</p>
<p>_____</p>	<p>_____</p>
 <p>7 m 3 m 9 m 8 m</p>	 <p>4 yd. 3 yd. 3 yd. 2 yd. 2 yd.</p>
<p>_____</p>	<p>_____</p>
 <p>3 cm 2 cm 2 cm 3 cm 3 cm 2 cm 2 cm 3 cm</p>	 <p>5 ft. 5 ft. 6 ft. 6 ft. 4 ft.</p>
<p>_____</p>	<p>_____</p>

## Answers

12 cm	36 yd.
21 ft.	44 in.
27 m	14 yd.
20 cm	26 ft.