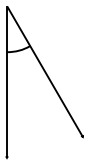


Measuring and classifying angles

Grade 4 Geometry Worksheet

Measure the angles and classify them as "right", "acute" or "obtuse".

1.



2.



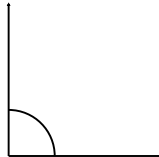
3.



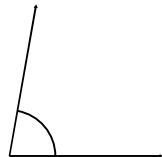
4.



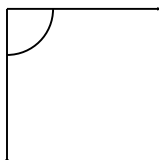
5.



6.



7.



8.



9.

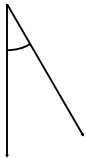


Measuring and classifying angles

Grade 4 Geometry Worksheet

Measure the angles and classify them as "right", "acute" or "obtuse".

1.



30° Acute

2.



125° Obtuse

3.



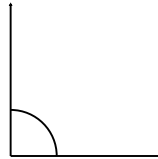
30° Acute

4.



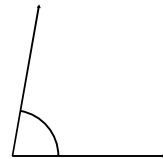
5° Acute

5.



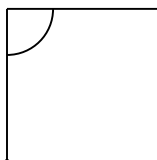
90° Right

6.



80° Acute

7.



90° Right

8.



175° Obtuse

9.



15° Acute