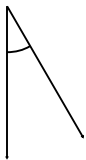


Measuring angles

Grade 4 Geometry Worksheet

Measure the angles using a protractor.

1.



2.



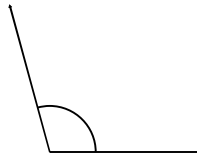
3.



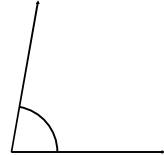
4.



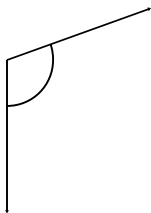
5.



6.



7.



8.



9.

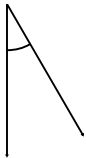


Measuring angles

Grade 4 Geometry Worksheet

Measure the angles using a protractor.

1.



30°

2.



125°

3.



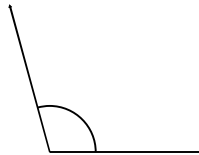
30°

4.



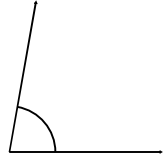
5°

5.



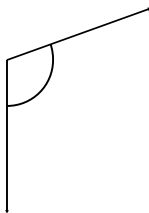
105°

6.



80°

7.



110°

8.



175°

9.



15°