

# Naming quadrilaterals


## Grade 3 Geometry Worksheet

Write the correct names for each of the following shapes.


rectangle      rhombus      trapezoid  
 parallelogram      kite      square









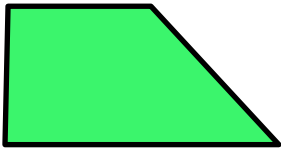







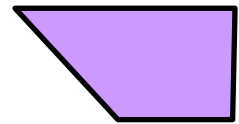























# Answers



trapezoid




square




rhombus



rectangle




rectangle



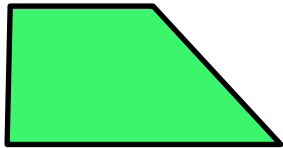
rhombus




kite



trapezoid



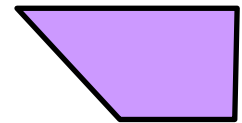
trapezoid



parallelogram




square



trapezoid



square



kite



rectangle



parallelogram