


Identifying quadrilaterals

Grade 3 Geometry Worksheet

Match the shapes to their names.




Square




Rectangle



Rhombus



Trapezoid



Parallelogram



Kite



Answers

