


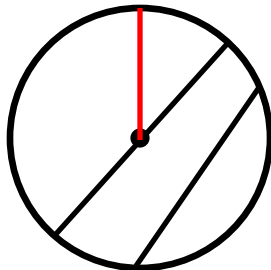
Parts of a circle

Grade 3 Geometry Worksheet

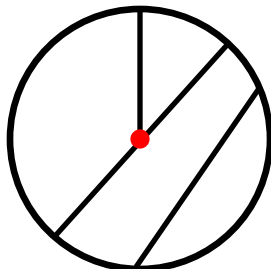
Circle the word that represents the red part of the circle.



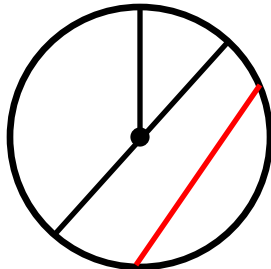
radius
diameter
center
circumference
chord



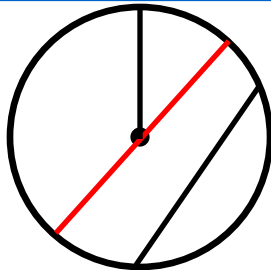
radius
diameter
center
circumference
chord



radius
diameter
center
circumference
chord



radius
diameter
center
circumference
chord




radius
diameter
center
circumference
chord

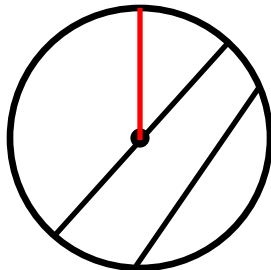
Parts of a circle

Grade 3 Geometry Worksheet

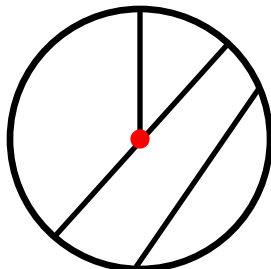
Answers:



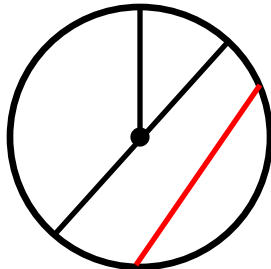
radius
diameter
center
circumference
chord



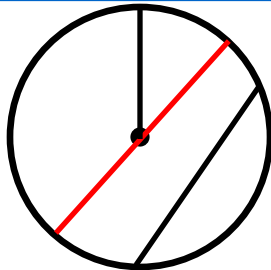
radius
diameter
center
circumference
chord



radius
diameter
center
circumference
chord



radius
diameter
center
circumference
chord



radius
diameter
center
circumference
chord