










## Area of rectangular shapes using a grid

### Grade 3 Geometry Worksheet

If each of the square is 1 square unit (shown below), find the area for the shapes shown below.

 = 1 square unit

	
<p>_____</p>	<p>_____</p>
	
<p>_____</p>	<p>_____</p>
	
<p>_____</p>	<p>_____</p>
	
<p>_____</p>	<p>_____</p>

## Answers

5 square units	4 square units
8 square units	7 square units
16 square units	18 square units
24 square units	46 square units