

Area of rectangles

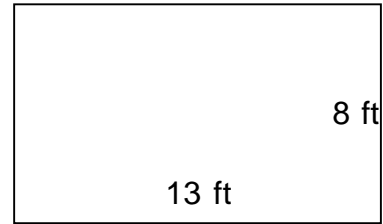
Grade 3 Geometry Worksheet

Find the area of each rectangle.

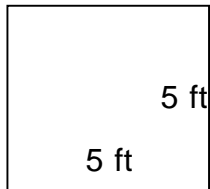
1.



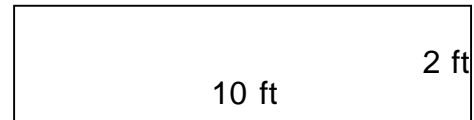
2.



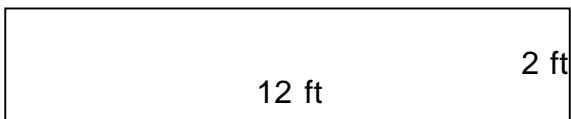
3.



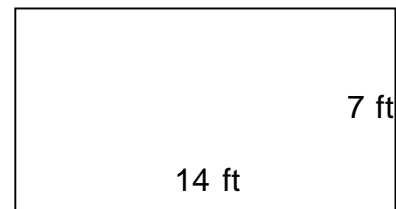
4.



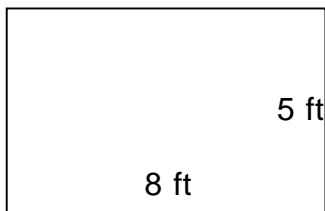
5.



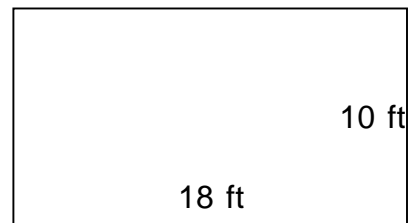
6.



7.



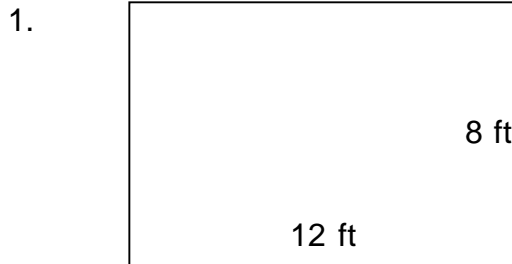
8.



Area of rectangles

Grade 3 Geometry Worksheet

Find the area of each rectangle.




$A = 96 \text{ ft}^2$



$A = 104 \text{ ft}^2$



$A = 25 \text{ ft}^2$



$A = 20 \text{ ft}^2$



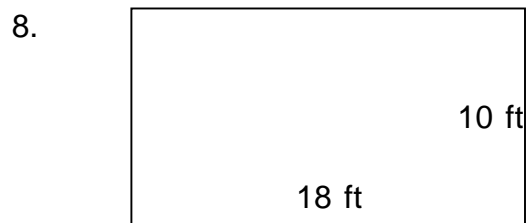
$A = 24 \text{ ft}^2$



$A = 98 \text{ ft}^2$



$A = 40 \text{ ft}^2$



$A = 180 \text{ ft}^2$
