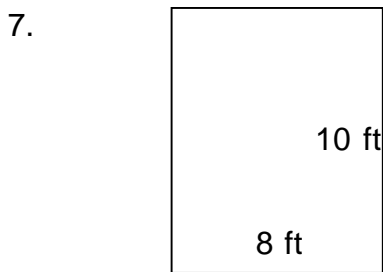




Area of rectangles

Grade 3 Geometry Worksheet


Find the area of each rectangle.



Area of rectangles

Grade 3 Geometry Worksheet


Find the area of each rectangle.



$A = 27 \text{ ft}^2$



$A = 70 \text{ ft}^2$



$A = 77 \text{ ft}^2$



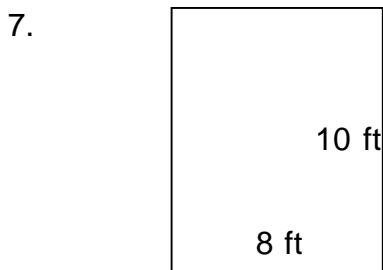
$A = 176 \text{ ft}^2$



$A = 220 \text{ ft}^2$



$A = 60 \text{ ft}^2$



$A = 80 \text{ ft}^2$



$A = 208 \text{ ft}^2$
