
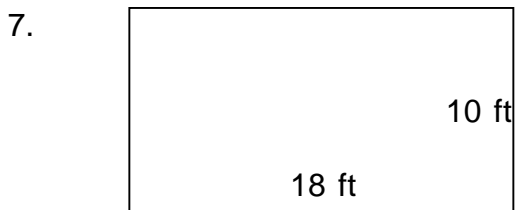
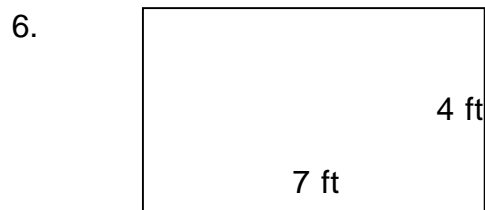
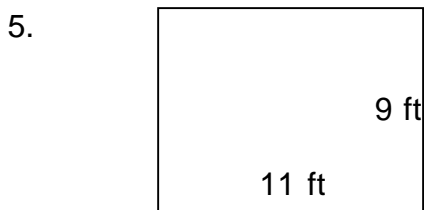

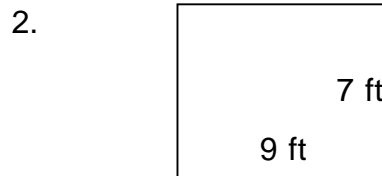
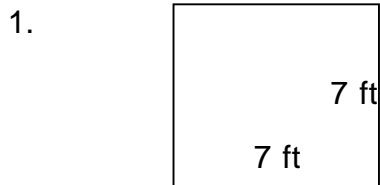


Area and perimeter of rectangles

Grade 3 Geometry Worksheet

Find the area and perimeter of each rectangle.

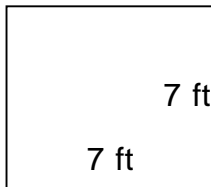


Area and perimeter of rectangles

Grade 3 Geometry Worksheet

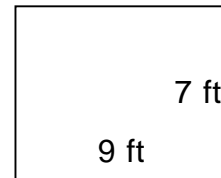
Find the area and perimeter of each rectangle.

1.



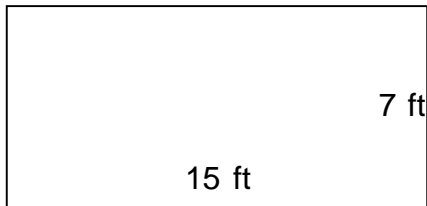
$P = 28 \text{ ft}$ $A = 49 \text{ ft}^2$

2.



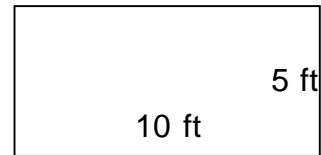
$P = 32 \text{ ft}$ $A = 63 \text{ ft}^2$

3.



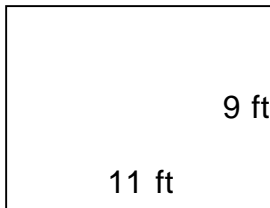
$P = 44 \text{ ft}$ $A = 105 \text{ ft}^2$

4.



$P = 30 \text{ ft}$ $A = 50 \text{ ft}^2$

5.



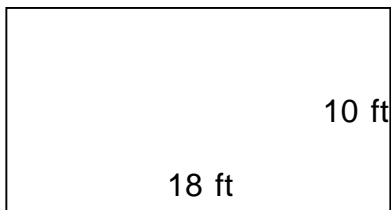
$P = 40 \text{ ft}$ $A = 99 \text{ ft}^2$

6.



$P = 22 \text{ ft}$ $A = 28 \text{ ft}^2$

7.



$P = 56 \text{ ft}$ $A = 180 \text{ ft}^2$

8.



$P = 46 \text{ ft}$ $A = 90 \text{ ft}^2$
