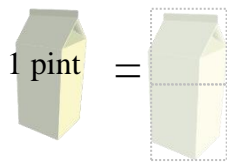


Measuring volume: cups, pints, quarts, and gallons

Grade 3 Measurement Worksheet

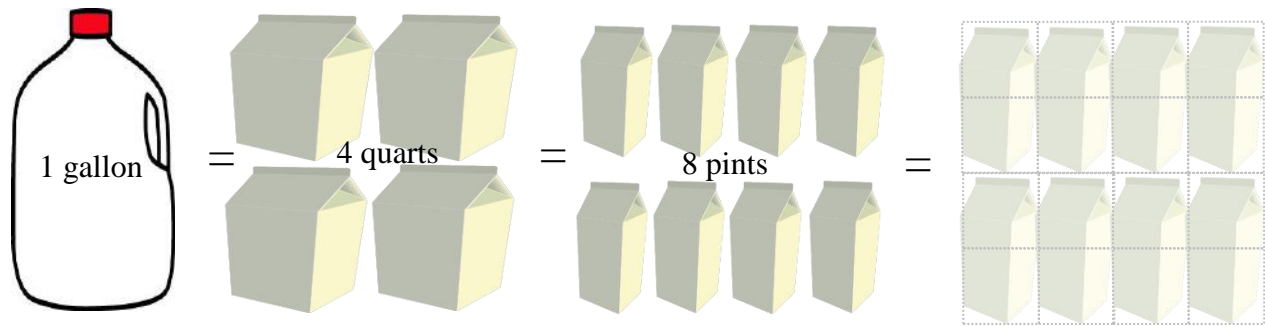
Cut out the cups at the bottom and place them in the squares below. Then, complete the blanks.



_____ cups



_____ cups



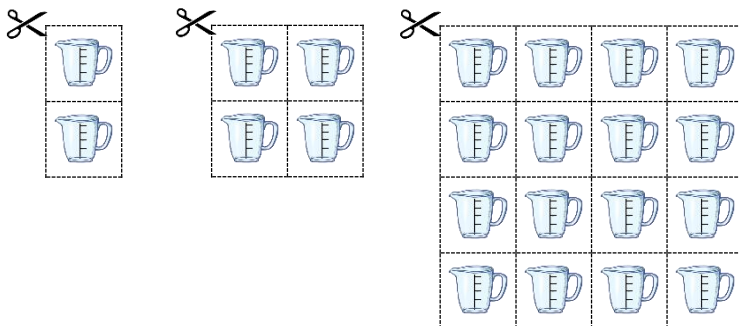
_____ cups

Which is more, one gallon or one cup? _____

Which is more, one quart or one pint? _____

Which is less, one cup or one pint? _____

Which is less, one quart or one pint? _____



Answer

Which is more, one gallon or one cup? **One gallon**

Which is more, one quart or one pint? **One quart**

Which is less, one cup or one pint? **One cup**

Which is less, one quart or one pint? **One pint**