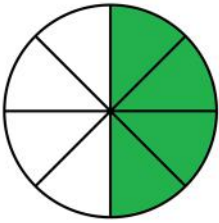
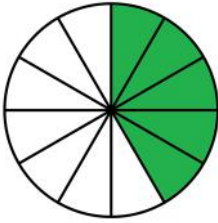


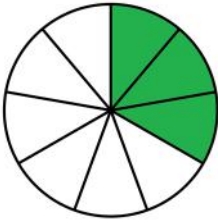
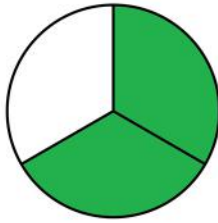
# Comparing proper fractions

## Grade 3 Fractions Worksheet

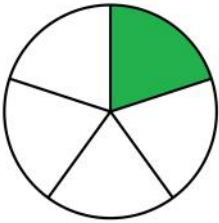
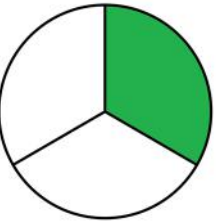
Write > (greater than), < (less than) or = (equal to) between the fractions.

1)  

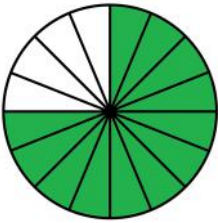
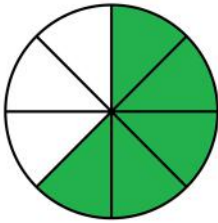
$\frac{4}{8}$    $\frac{5}{12}$

2)  

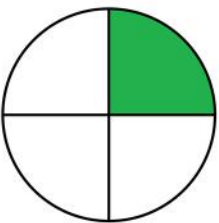
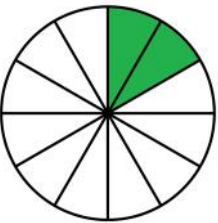
$\frac{3}{9}$    $\frac{2}{3}$

3)  

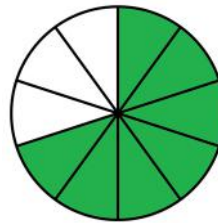
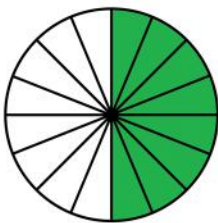
$\frac{1}{5}$    $\frac{1}{3}$

4)  

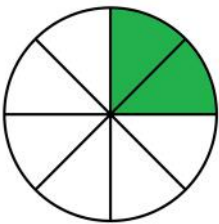
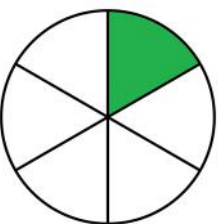
$\frac{12}{16}$    $\frac{5}{8}$

5)  

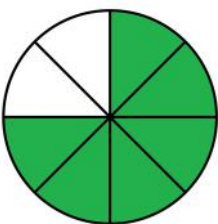
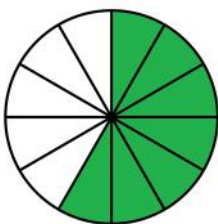
$\frac{1}{4}$    $\frac{2}{12}$

6)  

$\frac{7}{10}$    $\frac{8}{16}$

7)  

$\frac{2}{8}$    $\frac{1}{6}$

8)  

$\frac{6}{8}$    $\frac{7}{12}$

# Answers

