

Comparing proper fractions

Grade 3 Fractions Worksheet

Write > (greater than), < (less than) or = (equal to) between the fractions.

1)



$$\frac{1}{4}$$

<

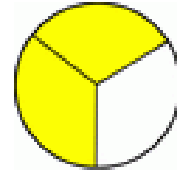


$$\frac{1}{2}$$

2)



$$\frac{1}{2}$$

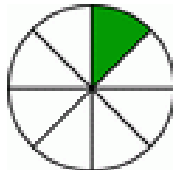


$$\frac{2}{3}$$

3)



$$\frac{2}{4}$$

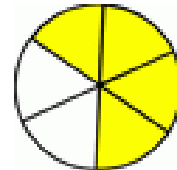


$$\frac{1}{8}$$

4)



$$\frac{1}{4}$$

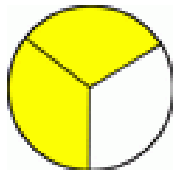


$$\frac{4}{6}$$

5)

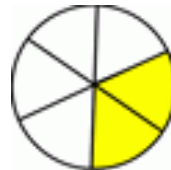


$$\frac{2}{8}$$

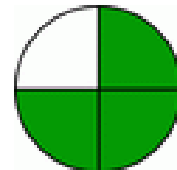


$$\frac{2}{3}$$

6)

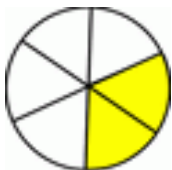


$$\frac{2}{6}$$

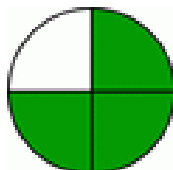


$$\frac{3}{4}$$

7)



$$\frac{2}{6}$$

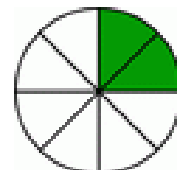


$$\frac{3}{4}$$

8)



$$\frac{4}{6}$$



$$\frac{2}{8}$$

Answers

1)



$$\frac{1}{4}$$

<



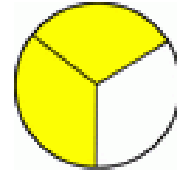
$$\frac{1}{2}$$

2)



$$\frac{1}{2}$$

<



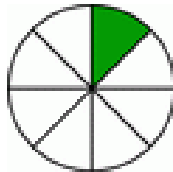
$$\frac{2}{3}$$

3)



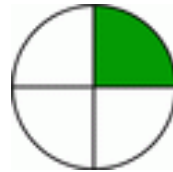
$$\frac{2}{4}$$

>



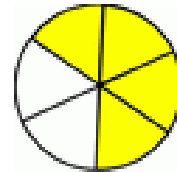
$$\frac{1}{8}$$

4)



$$\frac{1}{4}$$

<



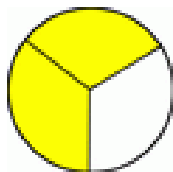
$$\frac{4}{6}$$

5)



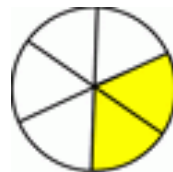
$$\frac{2}{8}$$

<



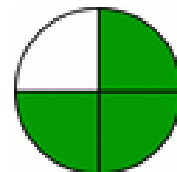
$$\frac{2}{3}$$

6)



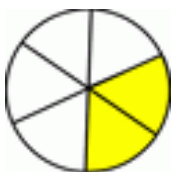
$$\frac{2}{6}$$

<



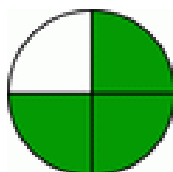
$$\frac{3}{4}$$

7)



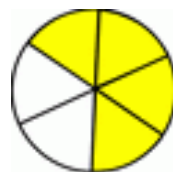
$$\frac{2}{6}$$

<



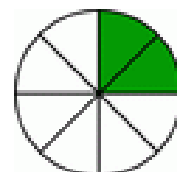
$$\frac{3}{4}$$

8)



$$\frac{4}{6}$$

>



$$\frac{2}{8}$$