

Comparing proper fractions

Grade 3 Fractions Worksheet

Write > (greater than), < (less than) or = (equal to) between the fractions.

1)



$$\frac{1}{4}$$

<

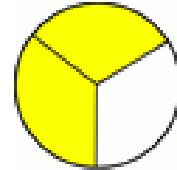


$$\frac{1}{2}$$

2)



$$\frac{15}{16}$$

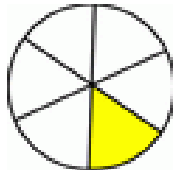


$$\frac{2}{3}$$

3)



$$\frac{1}{8}$$

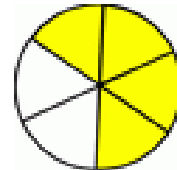


$$\frac{1}{6}$$

4)



$$\frac{1}{8}$$

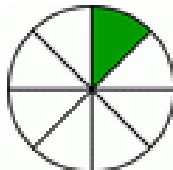


$$\frac{4}{6}$$

5)

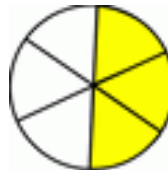


$$\frac{1}{3}$$

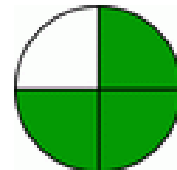


$$\frac{1}{8}$$

6)

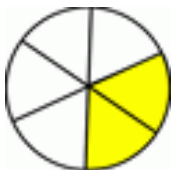


$$\frac{3}{6}$$

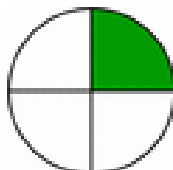


$$\frac{3}{4}$$

7)

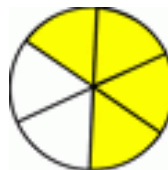


$$\frac{2}{6}$$

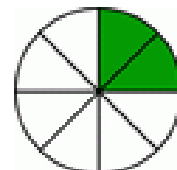


$$\frac{1}{4}$$

8)



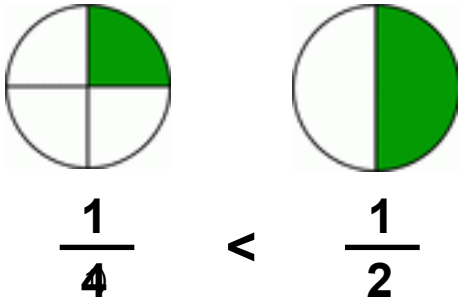
$$\frac{4}{6}$$



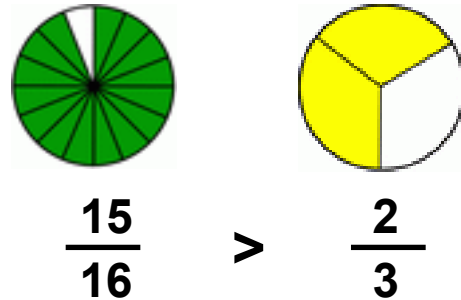
$$\frac{2}{8}$$

Answers

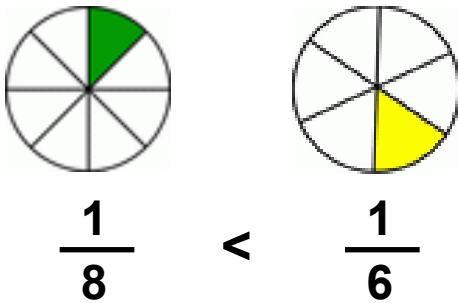
1)



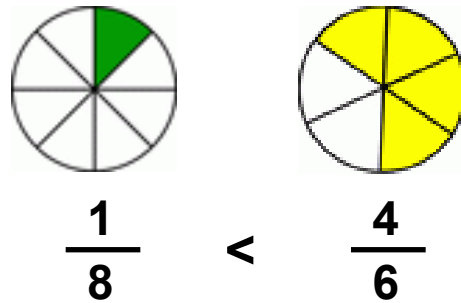
2)



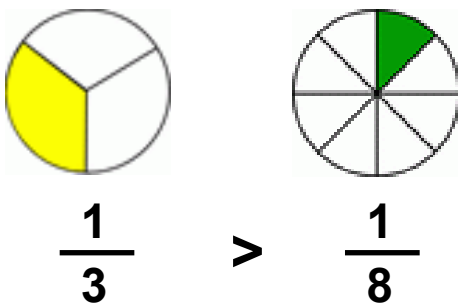
3)



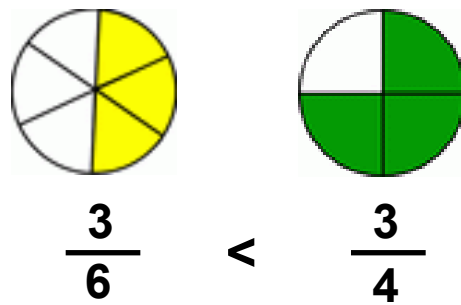
4)



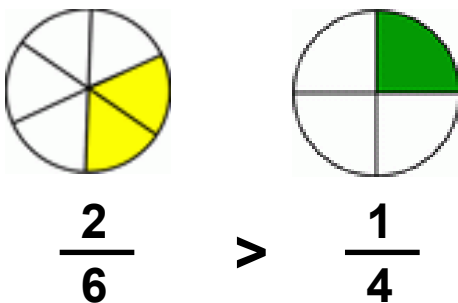
5)



6)



7)



8)

