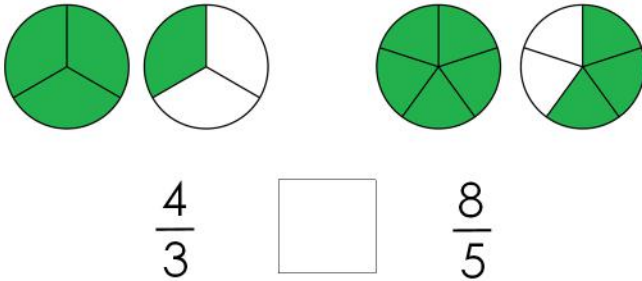


Comparing proper and improper fractions

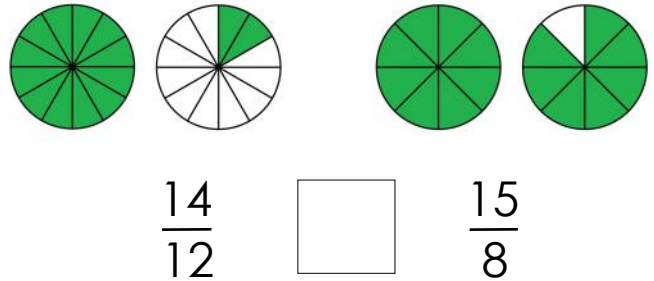
Grade 3 Fractions Worksheet

Write > (greater than), < (less than) or = (equal to) between the fractions.

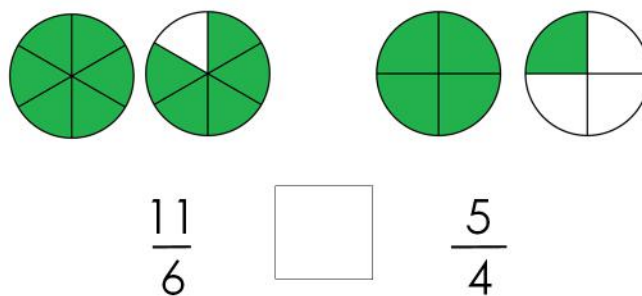
1)



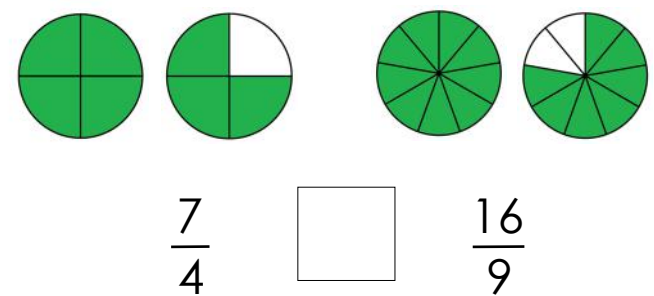
2)



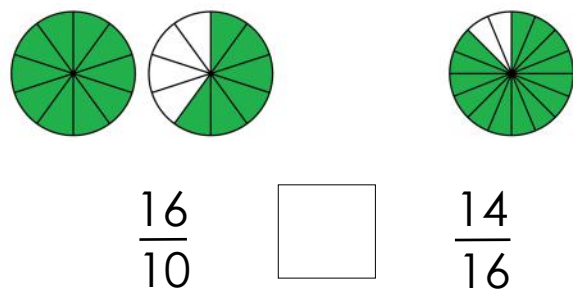
3)



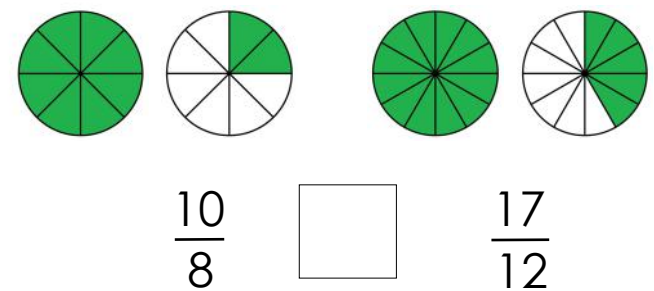
4)



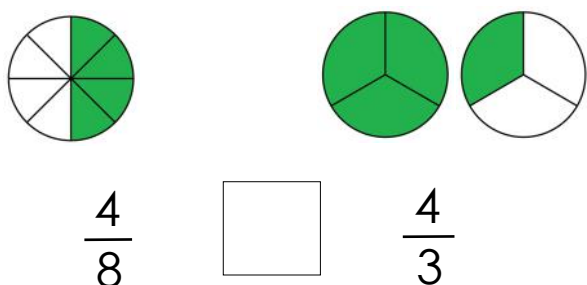
5)



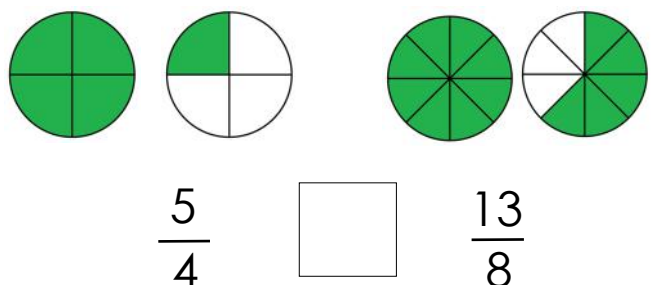
6)



7)



8)



Answers

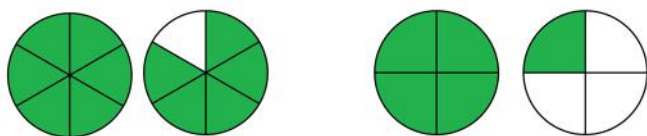
1)



$$\frac{4}{3} <$$

$$\frac{8}{5}$$

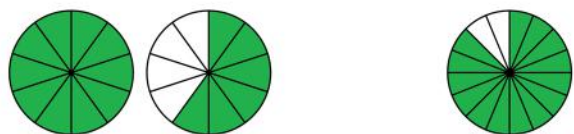
3)



$$\frac{11}{6} >$$

$$\frac{5}{4}$$

5)



$$\frac{16}{10} >$$

$$\frac{14}{16}$$

7)



$$\frac{4}{8} <$$

$$\frac{4}{3}$$

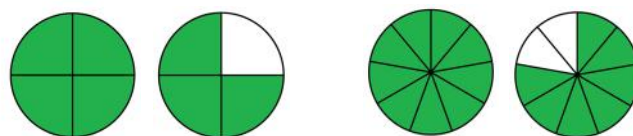
2)



$$\frac{14}{12} <$$

$$\frac{15}{8}$$

4)



$$\frac{7}{4} <$$

$$\frac{16}{9}$$

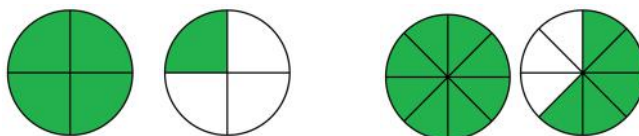
6)



$$\frac{10}{8} <$$

$$\frac{17}{12}$$

8)



$$\frac{5}{4} <$$

$$\frac{13}{8}$$