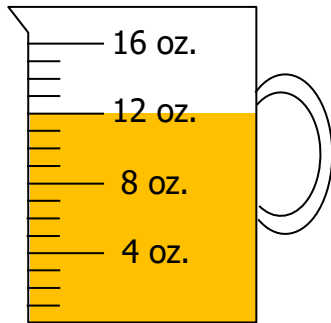


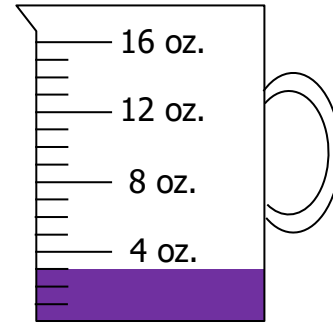
Reading a measuring cup in ounces (oz.)

Grade 3 Measurement Worksheet

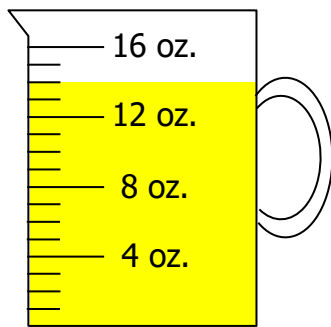
Find the volume of the juice in the following measuring cups.



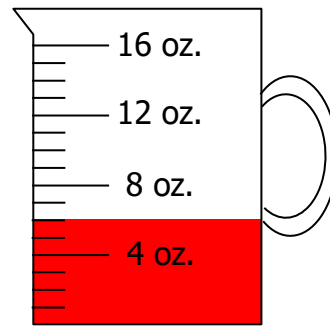
1) _____ oz.



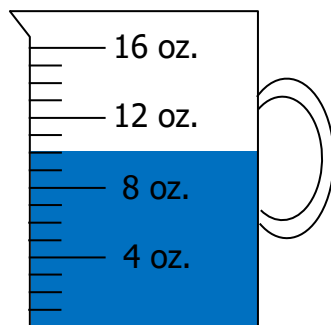
2) _____ oz.



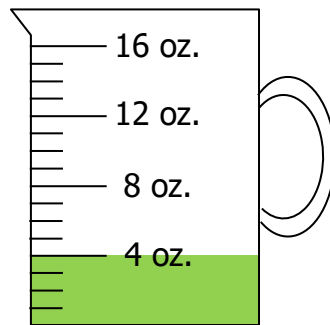
3) _____ oz.



4) _____ oz.



5) _____ oz.



6) _____ oz.

Answers

1) 12 oz.

2) 3 oz.

3) 14 oz.

4) 6 oz.

5) 10 oz.

6) 4 oz.