


Telling time - whole hours (draw the clock)

Grade 2 Time Worksheet


Draw the time shown on each clock.

1.




10:00

2.




4:00

3.




8:00

4.




1:00

5.




5:00

6.




12:00

7.




9:00

8.



3:00

9.




11:00

Telling time - whole hours (draw the clock)

Grade 2 Time Worksheet


Draw the time shown on each clock.

1.




10:00

2.




4:00

3.




8:00

4.




1:00

5.




5:00

6.




12:00

7.




9:00

8.



3:00

9.



11:00