

Rows, columns & arrays

Grade 2 Multiplication Worksheet

Fill in the blanks.




_____ rows of _____

_____ × _____ = _____



_____ rows of _____

_____ × _____ = _____



_____ rows of _____

_____ × _____ = _____




_____ rows of _____

_____ × _____ = _____



_____ rows of _____


_____ × _____ = _____



_____ rows of _____

_____ × _____ = _____

Answers



3 rows of 4

$$3 \times 4 = 12$$



4 rows of 1

$$4 \times 1 = 4$$



3 rows of 6

$$3 \times 6 = 18$$



5 rows of 8

$$5 \times 8 = 40$$



3 rows of 9

$$3 \times 9 = 27$$



5 rows of 3

$$5 \times 3 = 15$$