


## Multiplication sentences

### Grade 2 Multiplication Worksheet

Circle the equation that describes the group of objects.



$5 \times 4 =$

$5 \times 2 =$

$3 \times 2 =$

$4 \times 2 =$

How many cherries are there? \_\_\_\_\_




$2 \times 4 =$

$2 \times 8 =$

$2 \times 6 =$

$4 \times 8 =$

How many spider legs are there? \_\_\_\_\_



$9 \times 3 =$

$6 \times 3 =$

$3 \times 9 =$

$3 \times 3 =$

How many penguins are there? \_\_\_\_\_



$5 \times 7 =$


$4 \times 2 =$

$2 \times 7 =$

$2 \times 5 =$

How many roses are there?  
\_\_\_\_\_

# Answers




$5 \times 4 =$

$5 \times 2 =$

$3 \times 2 =$

$4 \times 2 =$

How many cherries are there? 10




$2 \times 4 =$

$2 \times 8 =$

$2 \times 6 =$

$4 \times 8 =$

How many spider legs are there? 16



$9 \times 3 =$

$6 \times 3 =$

$3 \times 9 =$

$3 \times 3 =$

How many penguins are there? 9



$5 \times 7 =$

$4 \times 2 =$

$2 \times 7 =$

$2 \times 5 =$

How many roses are there? 14