


Multiplication with arrays

Grade 2 Multiplication Worksheet


Complete the equations.



$$2 \times \boxed{} = 12$$



$$6 \times \boxed{} = 24$$




$$\boxed{} \times 5 = 25$$



$$2 \times \boxed{} = 16$$



$$\boxed{} \times 5 = 20$$




$$3 \times \boxed{} = 21$$


Answers




$$2 \times \boxed{6} = 12$$



$$6 \times \boxed{4} = 24$$




$$\boxed{5} \times 5 = 25$$



$$2 \times \boxed{8} = 16$$



$$\boxed{4} \times 5 = 20$$



$$3 \times \boxed{7} = 21$$