
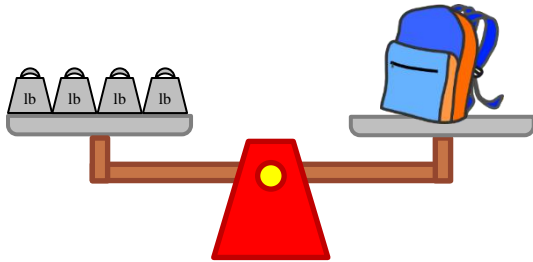



Measure weights in pounds

Grade 2 Measurement Worksheet

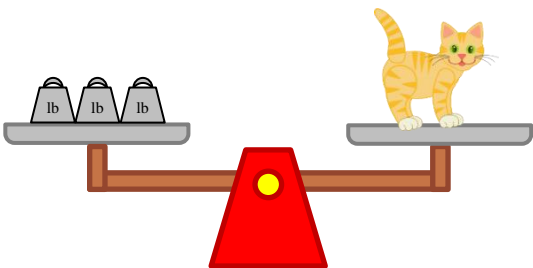
 = 1 pound



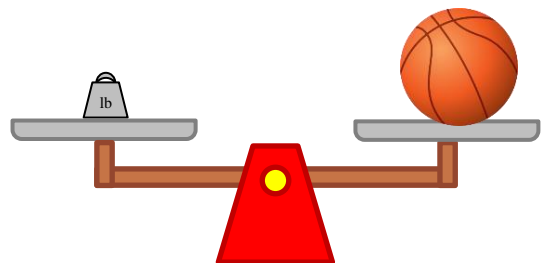
The bag weighs ____ pound.




The watermelon weighs ____ pounds.



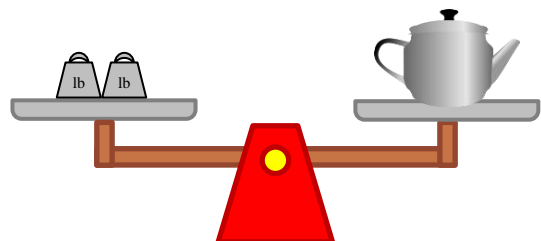
The cat weighs ____ pounds.



The basketball weighs ____ pounds.



The flowerpot weighs ____ pounds.



The teapot weighs ____ pounds.

How much heavier is the flowerpot than the bag? _____

How much heavier is the watermelon than the cat? _____

Answers

The school bag weighs **4** pounds.

The watermelon weighs **10** pounds.

The cat weighs **3** pounds.

The basketball weighs **1** pound.

The flowerpot weighs **6** pounds.

The teapot weighs **2** pounds.

How much heavier is the flowerpot than the bag?

2 pounds

How much heavier is the watermelon than the cat?

7 pounds