
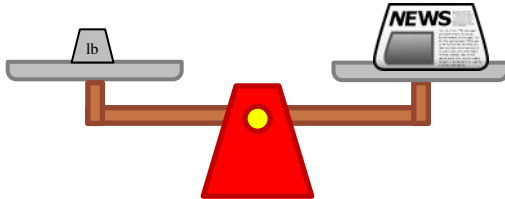


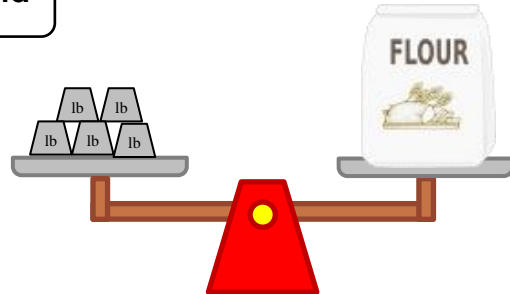
# Measure weights in pounds

## Grade 2 Measurement Worksheet

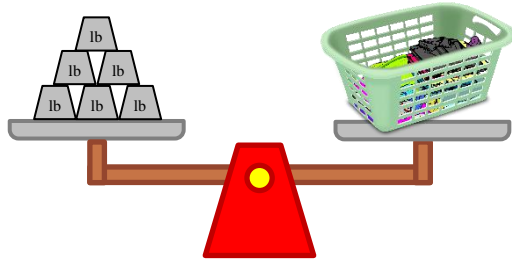
 = 1 pound



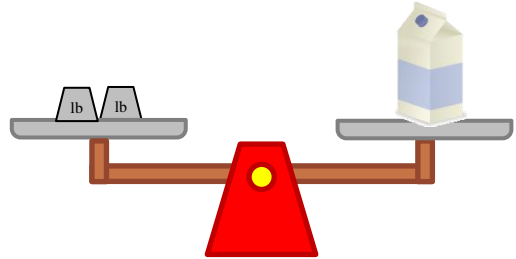
The newspaper weighs \_\_\_\_\_ pound.



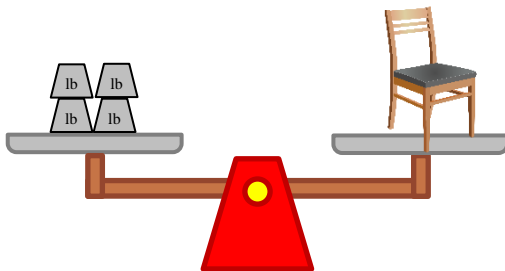
The bag of flour weighs \_\_\_\_\_ pounds.



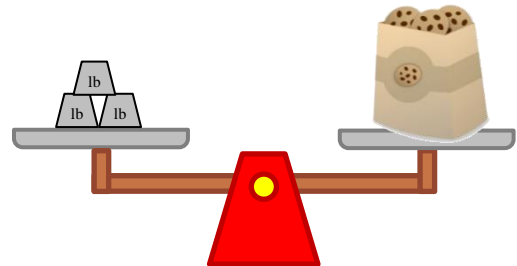
The laundry weighs \_\_\_\_\_ pounds.



The milk carton weighs \_\_\_\_\_ pounds.



The chair weighs \_\_\_\_\_ pounds.



The bag of cookies weighs \_\_\_\_\_ pounds.

How much heavier is the laundry than the newspaper? \_\_\_\_\_

How much heavier is the chair than the bag of flour? \_\_\_\_\_

## Answers

The newspaper weighs **1** pound.

The bag of flour weighs **5** pounds.

The laundry weighs **6** pounds.

The milk carton weighs **2** pounds.

The chair weighs **4** pounds.

The bag of cookies weighs **3** pounds.

How much heavier is the laundry than the newspaper?

**5 pounds**

How much heavier is the chair than the bag of flour?

**1 pound**