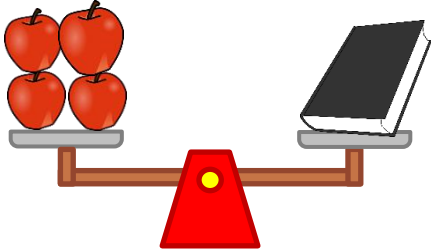



Measuring weight with non-standard units

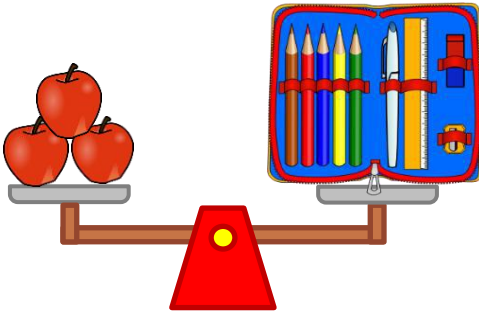
Grade 2 Measurement Worksheet



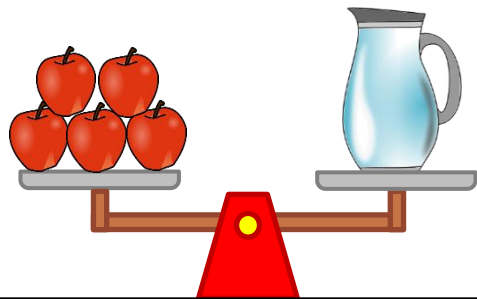
The weight of the book is _____ apples.



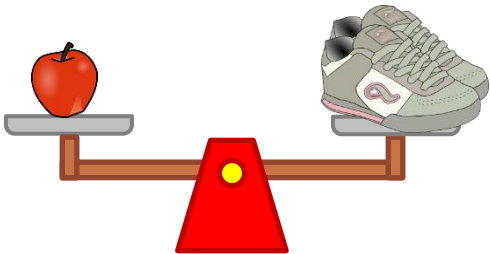
The weight of the table lamp is _____ apples.



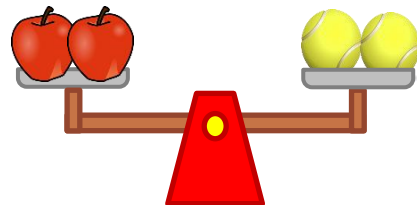
The weight of the pencil case is _____ apples.



The weight of the pitcher is _____ apples.



The weight of the trainers is _____ apples.



The weight of the tennis balls is _____ apples.

Which object is the heaviest? _____

Which is heavier: the trainers or the tennis balls? _____

Answers

The weight of the book is **4 apples.**

The weight of the table lamp is **8 apples.**

The weight of the pencil case is **3 apples.**

The weight of the pitcher is **5 apples.**

The weight of the trainers is **1 apple.**

The weight of the tennis balls is **2 apples.**

Which object is the heaviest?

The table lamp is the heaviest.

Which is heavier: the trainers or the tennis balls?

The tennis balls.