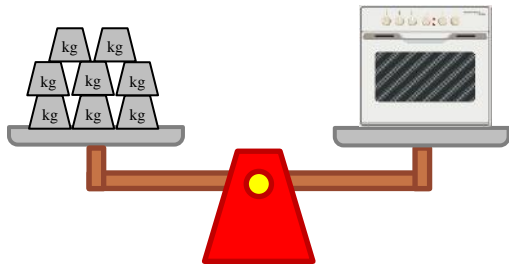
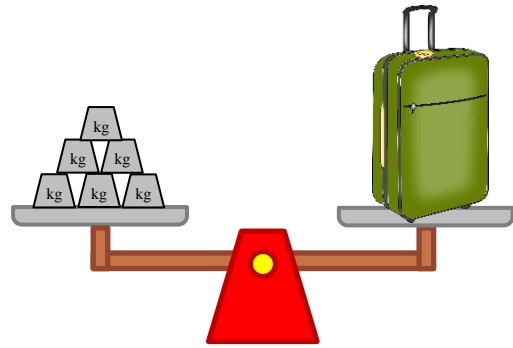


## Measure weights with metric units (kilograms)

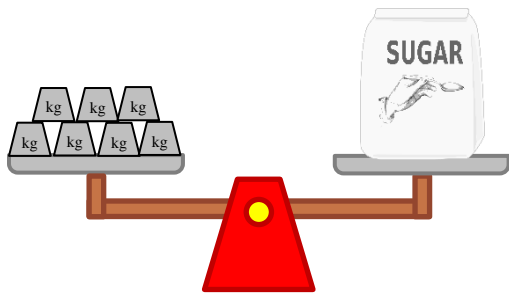
### Grade 2 Measurement Worksheet



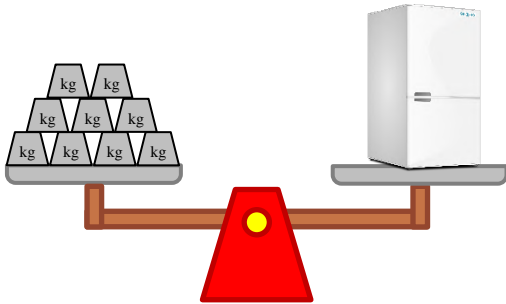
The oven weighs \_\_\_\_ kg.



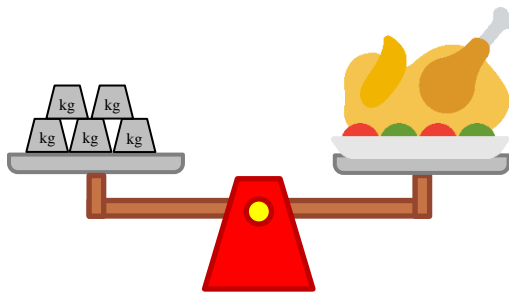
The suitcase weighs \_\_\_\_ kg.



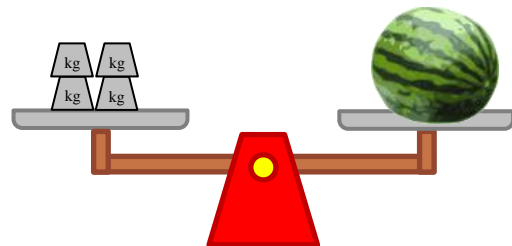
The bag of sugar weighs \_\_\_\_ kg.



The fridge weighs \_\_\_\_ kg.



The roasted turkey weighs \_\_\_\_ kg.



The watermelon weighs \_\_\_\_ kg.

Which object is the heaviest? \_\_\_\_\_

Which object is the lightest? \_\_\_\_\_

## Answers

The oven weighs **8** kg.

The suitcase weighs **6** kg.

The bag of sugar weighs **7** kg.

The fridge weighs **9** kg.

The roasted turkey weighs **5** kg.

The watermelon weighs **4** kg.

Which object is the heaviest?

**The fridge**

Which object is the lightest?

**The watermelon**