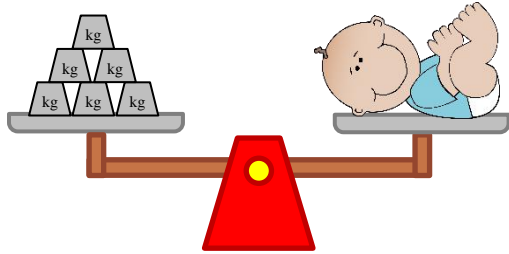
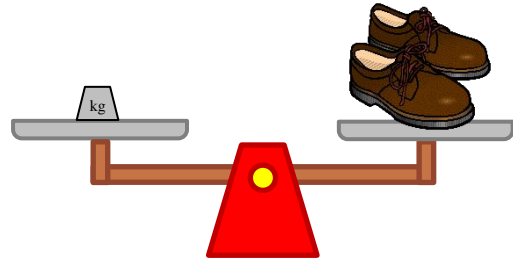


Measure weights with metric units (kilograms)

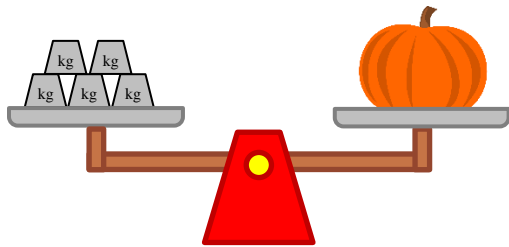
Grade 2 Measurement Worksheet



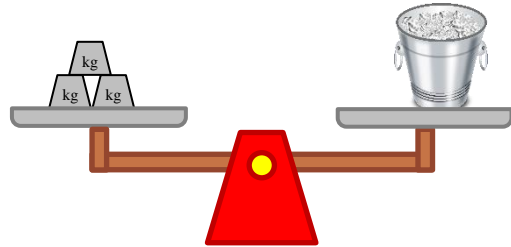
The baby weighs ____ kg.



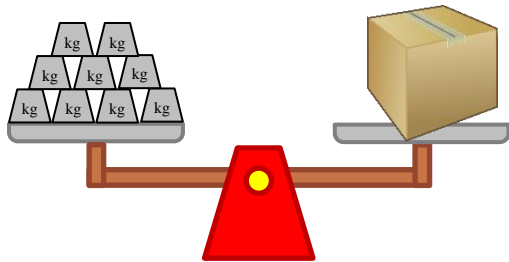
The pair of shoes weighs ____ kg.



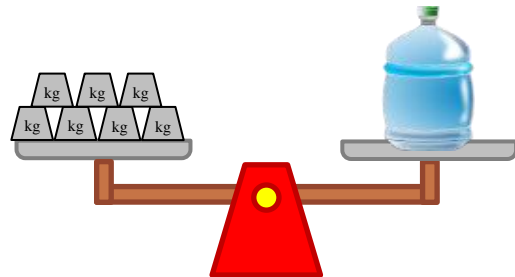
The pumpkin weighs ____ kg.



The ice bucket weighs ____ kg.



The box weighs ____ kg.



The water bottle weighs ____ kg.

Which object is the heaviest? _____

Which object is the lightest? _____

Answers

The baby weighs **6** kg.

The pair of shoes weighs **1** kg.

The pumpkin weighs **5** kg.

The ice bucket weighs **3** kg.

The box weighs **9** kg.

The water bottle weighs **7** kg.

Which object is the heaviest?

The box

Which object is the lightest?

The pair of shoes