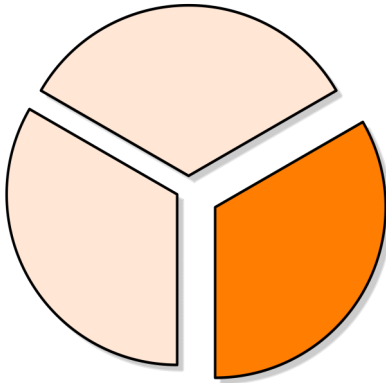


Identifying parts of a whole using shapes

Grade 2 Geometry Worksheet

The circle has been split into equal parts. How much of the circle is orange?
Circle the correct answer choice.



one-half

one-third

one-fourth

How much of the star is colored red? Circle the correct answer choice.

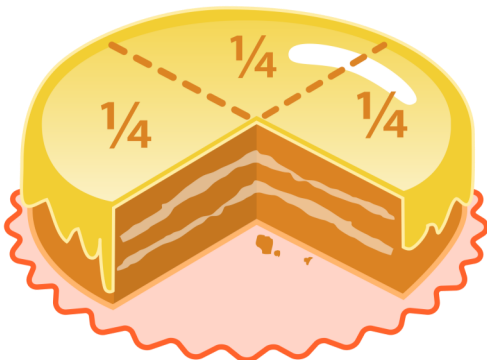


one-half

one-third

one-fourth

How much of the cake is missing? Circle the correct answer choice.



one-half

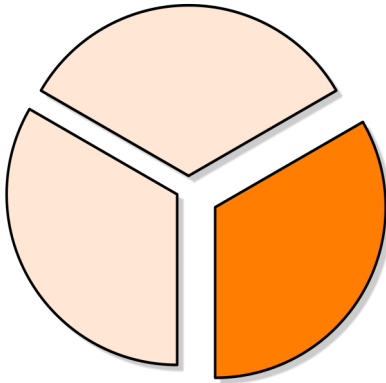
one-third

one-fourth

Identifying parts of a whole using shapes

Geometry Worksheet

The circle has been split into equal parts. How much of the circle is orange?
Underline the correct answer.



one-half

one-third

one-fourth

How much of the star is colored red? Underline the correct answer.

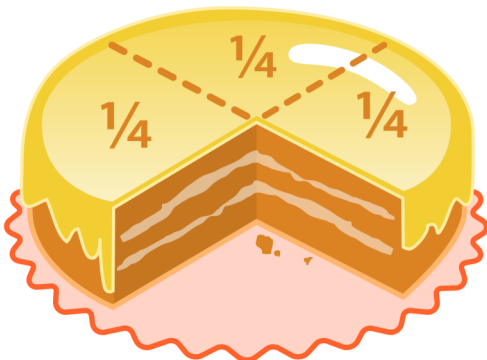


one-half

one-third

one-fourth

How much of the cake is missing? Underline the correct answer.



one-half

one-third

one-fourth
