







Creating squares & rectangles

Grade 2 Geometry Worksheet

Each rectangle and square below can be made of identical small squares. How many squares are required to fill each shape? The first one is done for you.

<div data-bbox="110 674 240 804" style="border: 2px solid red; padding: 5px; display: inline-block;">3</div> <div data-bbox="305 779 602 890" style="margin-left: 20px;"></div>	<div data-bbox="792 674 927 804" style="border: 2px solid red; padding: 5px; display: inline-block;"></div> <div data-bbox="1068 730 1365 940" style="margin-left: 20px;"></div>
<div data-bbox="110 1003 240 1134" style="border: 2px solid red; padding: 5px; display: inline-block;"></div> <div data-bbox="396 1155 602 1360" style="margin-left: 20px;"></div>	<div data-bbox="792 1003 927 1134" style="border: 2px solid red; padding: 5px; display: inline-block;"></div> <div data-bbox="1032 1113 1446 1402" style="margin-left: 20px;"></div>
<div data-bbox="110 1493 240 1623" style="border: 2px solid red; padding: 5px; display: inline-block;"></div> <div data-bbox="272 1644 686 1843" style="margin-left: 20px;"></div>	<div data-bbox="792 1493 927 1623" style="border: 2px solid red; padding: 5px; display: inline-block;"></div> <div data-bbox="1097 1581 1385 1892" style="margin-left: 20px;"></div>

Creating squares & rectangles

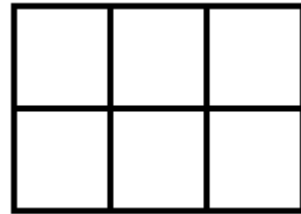
Grade 2 Geometry Worksheet

Each rectangle and square below can be made of identical small squares. How many squares are required to fill each shape? The first one is done for you.

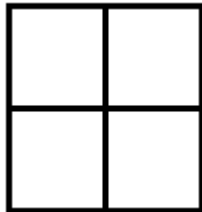
3



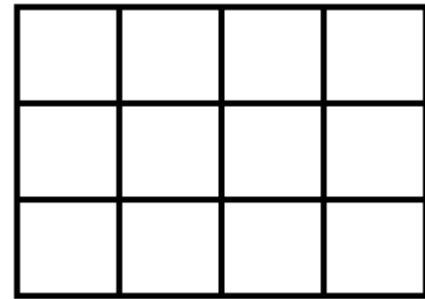
6



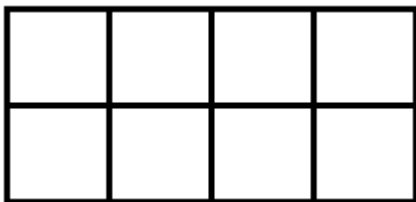
4



12



8



9

