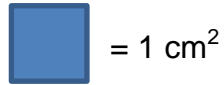










Finding the area of a rectangle using a rectangular grid

Grade 2 Geometry Worksheet

If each of the square is 1 cm (shown below), find the area for the shapes shown below.



	
<p>_____</p>	<p>_____</p>
	
<p>_____</p>	<p>_____</p>
	
<p>_____</p>	<p>_____</p>
	
<p>_____</p>	<p>_____</p>

Answers

4 cm^2	8 cm^2
6 cm^2	10 cm^2
12 cm^2	7 cm^2
20 cm^2	21 cm^2