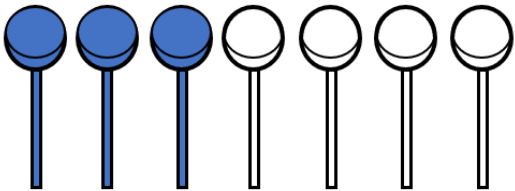




Fraction word problems – Trick or Treat

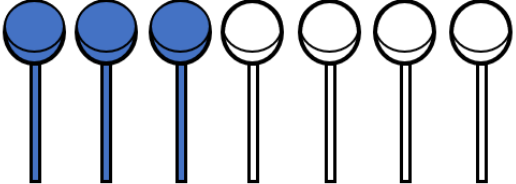



Grade 2 Fractions Worksheet

Last night, Maria and Daniella went out trick-or-treating.

<p>There were 7 lollipops. Daniella ate $\frac{2}{7}$ of the lollipops, while Maria ate $\frac{3}{7}$ of the lollipops. Color the lollipops Maria ate BLUE.</p>	
<p>They collected chocolate bars from their generous neighbors. Maria and Daniella each had $\frac{1}{5}$ of the chocolate bars. Cross out the chocolate bars they ate.</p>	
<p>Mrs. Barnes gave them marshmallows. They decided to eat $\frac{3}{5}$ of them. How many marshmallows were left? Color the remaining marshmallows YELLOW.</p>	

<p>Maria and Daniella collected 4 cookies. They each ate $\frac{1}{4}$ of the cookies. Cross out the cookies they ate and color the cookies left.</p>	
<p>Daniella collected candies. $\frac{2}{9}$ were chocolate flavored, $\frac{4}{9}$ were mint flavored, and the rest were strawberry flavored. How many candies were strawberry flavored? Color the strawberry flavored candies PINK.</p>	

Answer

<p>There were 7 lollipops. Daniella ate $\frac{2}{7}$ of the lollipops, while Maria ate $\frac{3}{7}$ of the lollipops. Color the lollipops Maria ate BLUE.</p>	
<p>They collected chocolate bars from their generous neighbors. Maria and Daniella each had $\frac{1}{5}$ of the chocolate bars. Cross out the chocolate bars they ate.</p>	
<p>Mrs. Barnes gave them marshmallows. They decided to eat $\frac{3}{5}$ of them. How many marshmallows were left? Color the remaining marshmallows YELLOW.</p>	
<p>Maria and Daniella collected 4 cookies. They each ate $\frac{1}{4}$ of the cookies. Cross out the cookies they ate and color the cookies left.</p>	
<p>Daniella collected candies. $\frac{2}{9}$ were chocolate flavored, $\frac{4}{9}$ were mint flavored, and the rest were strawberry flavored. How many candies were strawberry flavored? Color the strawberry flavored candies PINK.</p>	