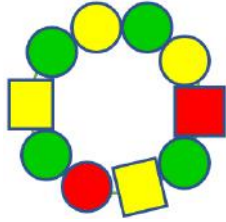
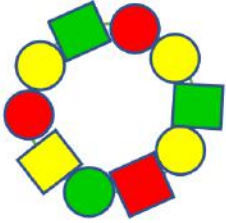


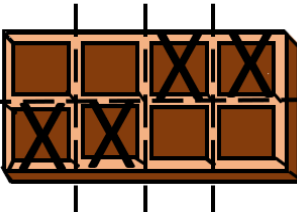
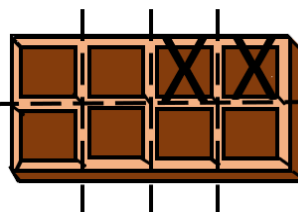
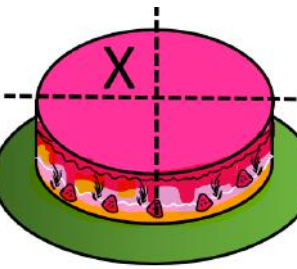
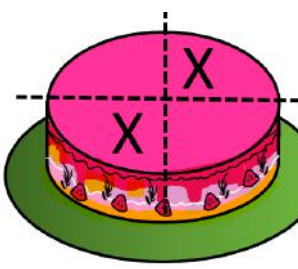
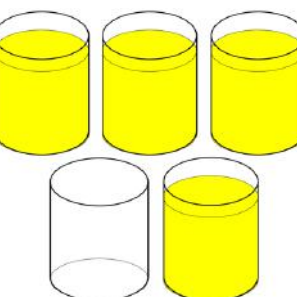
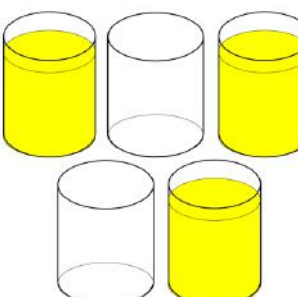


## Fraction word problems – Mother's Day

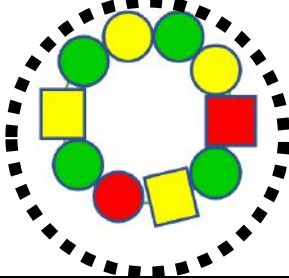
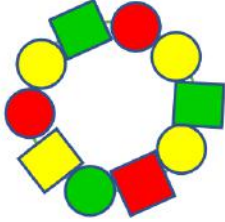


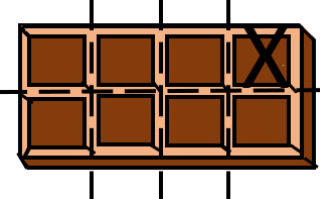
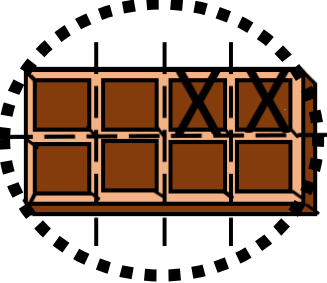
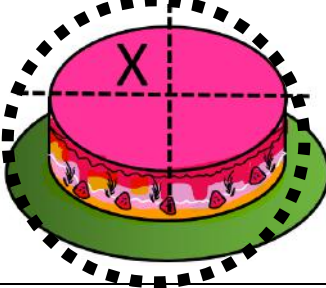
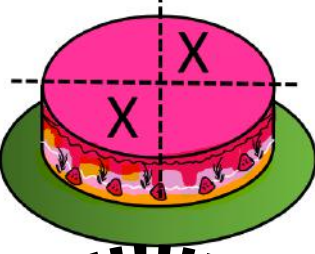
### Grade 2 Fractions Worksheet

Patricia and Alliyah are preparing their gifts for Mothers' Day.

<p>Patricia made a bracelet with beads for her mother. <math>\frac{3}{10}</math> of the beads are square and the rest are round. Circle the bracelet she made.</p>		
<p>Alliyah picked flowers. <math>\frac{1}{4}</math> of the flowers Alliyah picked have 8 petals, <math>\frac{2}{4}</math> of them have 5 petals and the rest have 3 petals. Circle the flowers picked by Alliyah.</p>		

<p>Mrs. Williams received a chocolate bar from her daughters. She cut it into equal parts, and she gave <math>\frac{1}{8}</math> to each of her daughters, Patricia and Alliyah. Circle the chocolate Mrs. Williams has left.</p>		
<p>Mr. Williams bought a strawberry cake for his wife. He sliced it into equal parts. He gave <math>\frac{1}{4}</math> of it to his wife. Circle the strawberry cake that was left.</p>		
<p>Mrs. Williams gets pineapple juice from the refrigerator and pours it into five glasses. After an hour, <math>\frac{2}{5}</math> of the glasses were empty. Circle the correct picture.</p>		

## Answer

<p>Patricia made a bracelet with beads for her mother. <math>\frac{3}{10}</math> of the beads are square and the rest are round. Circle the bracelet she made.</p>		
<p>Alliyah picked flowers. <math>\frac{1}{4}</math> of the flowers Alliyah picked have 8 petals, <math>\frac{2}{4}</math> of them have 5 petals and the rest have 3 petals. Circle the flowers picked by Alliyah.</p>		
<p>Mrs. Williams received a chocolate bar from her daughters. She cut it into equal parts and she gave <math>\frac{1}{8}</math> to each of her daughters, Patricia and Alliyah. Circle the chocolate Mrs. Williams has left.</p>		
<p>Mr. Williams bought a strawberry cake for his wife. He sliced into equal parts. He gave <math>\frac{1}{4}</math> of it to his wife. Circle the strawberry cake that was left.</p>		
<p>Mrs. Williams gets pineapple juice from the refrigerator and pours it into five glasses. After an hour, <math>\frac{2}{5}</math> of the glasses were empty. Circle the correct picture.</p>	