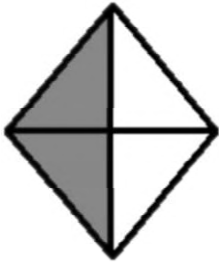
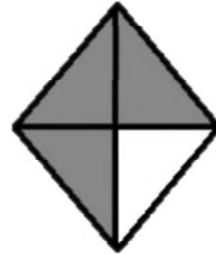
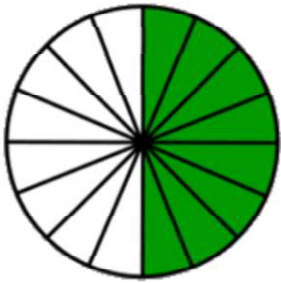
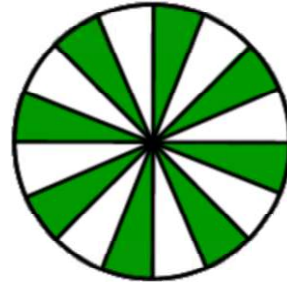


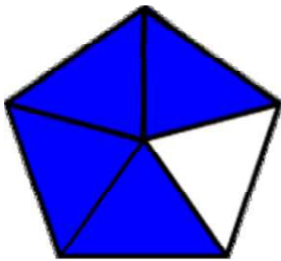
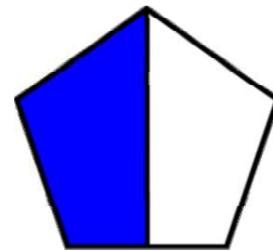
Writing fractions

Grade 1 Fractions Worksheet

Write the fraction of the shape that is filled in.


$$\frac{\square}{\square}$$

$$\frac{\square}{\square}$$

$$\frac{\square}{\square}$$

$$\frac{\square}{\square}$$

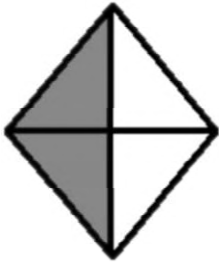
$$\frac{\square}{\square}$$

$$\frac{\square}{\square}$$

$$\frac{\square}{\square}$$

$$\frac{\square}{\square}$$

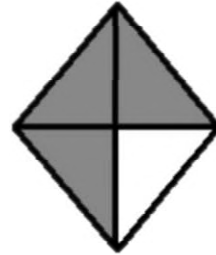
Writing fractions

Grade 1 Fractions Worksheet

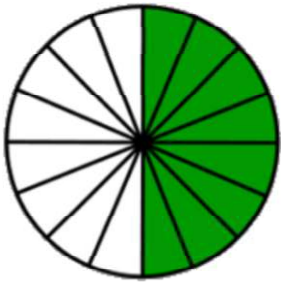
Write the fraction of the shape that is filled in.



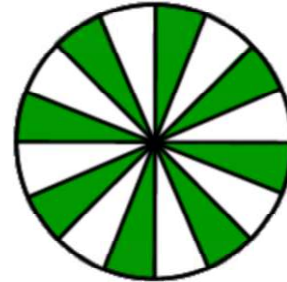
$$\frac{2}{4}$$



$$\frac{3}{4}$$



$$\frac{8}{16}$$



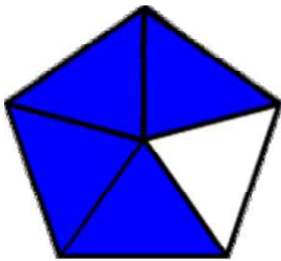
$$\frac{8}{16}$$



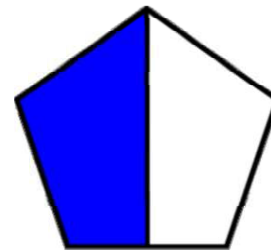
$$\frac{3}{8}$$



$$\frac{5}{8}$$



$$\frac{4}{5}$$



$$\frac{1}{2}$$