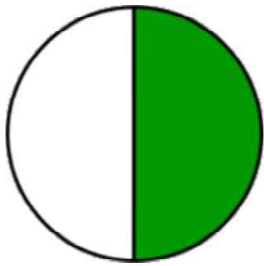
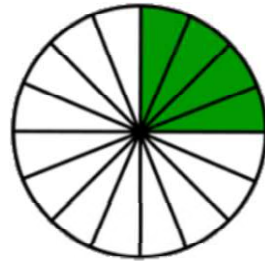


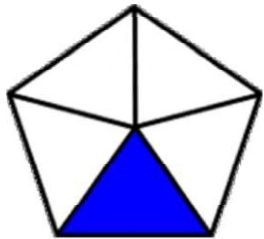
# Writing fractions

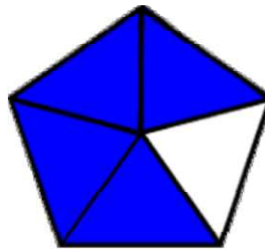
## Grade 1 Fractions Worksheet

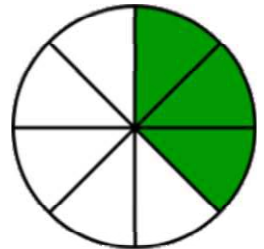
Write the fraction of the shape that is filled in.

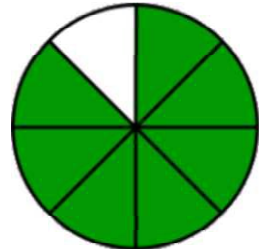


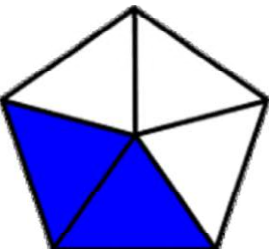
$$\frac{\square}{\square}$$


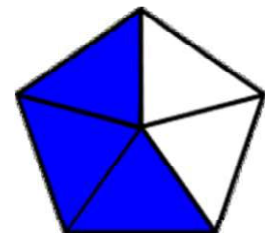
$$\frac{\square}{\square}$$


$$\frac{\square}{\square}$$


$$\frac{\square}{\square}$$


$$\frac{\square}{\square}$$


$$\frac{\square}{\square}$$


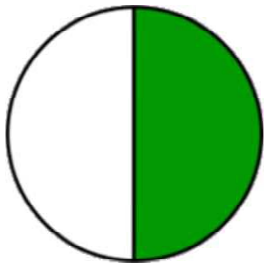
$$\frac{\square}{\square}$$


$$\frac{\square}{\square}$$

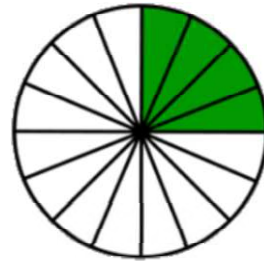
# Writing fractions

## Grade 1 Fractions Worksheet

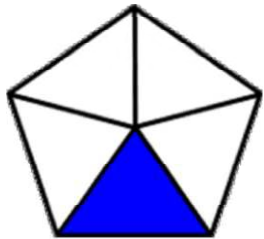
Write the fraction of the shape that is filled in.



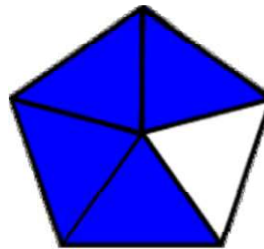
$$\frac{1}{2}$$



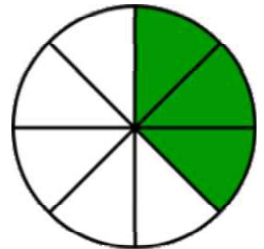
$$\frac{4}{16}$$



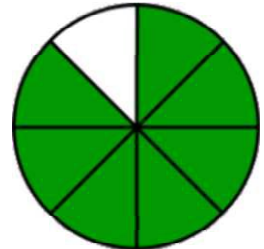
$$\frac{1}{5}$$



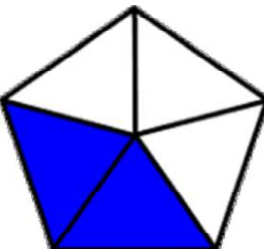
$$\frac{4}{5}$$



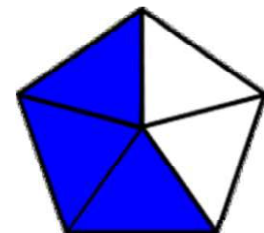
$$\frac{3}{8}$$



$$\frac{7}{8}$$



$$\frac{2}{5}$$



$$\frac{3}{5}$$