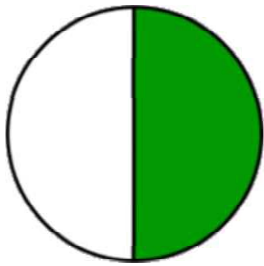
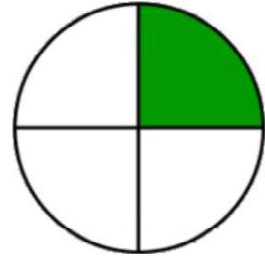


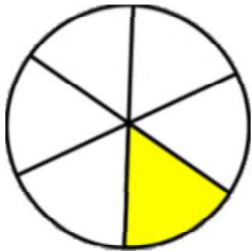
Writing fractions

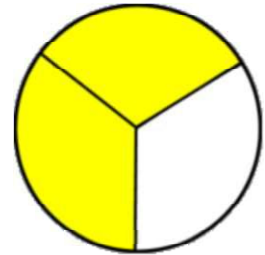
Grade 1 Fractions Worksheet

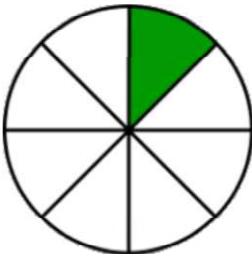
Write the fraction of the shape that is filled in.

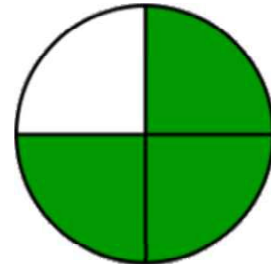


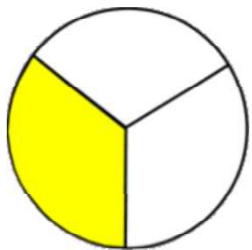
$$\frac{\boxed{1}}{\boxed{\quad}}$$


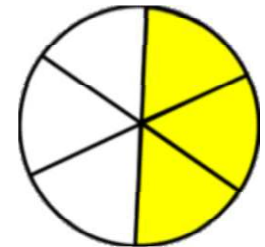
$$\frac{\boxed{\quad}}{\boxed{\quad}}$$


$$\frac{\boxed{\quad}}{\boxed{6}}$$


$$\frac{\boxed{\quad}}{\boxed{\quad}}$$


$$\frac{\boxed{\quad}}{\boxed{\quad}}$$


$$\frac{\boxed{\quad}}{\boxed{\quad}}$$


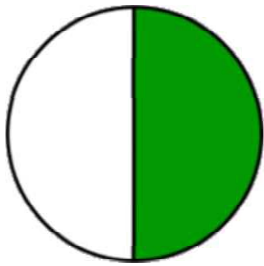
$$\frac{\boxed{\quad}}{\boxed{\quad}}$$


$$\frac{\boxed{\quad}}{\boxed{\quad}}$$

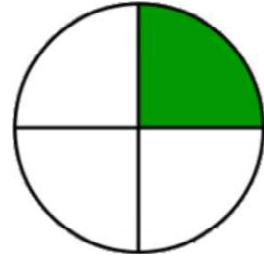
Writing fractions

Grade 1 Fractions Worksheet

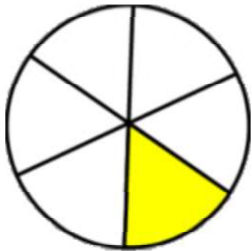
Write the fraction of the shape that is filled in.



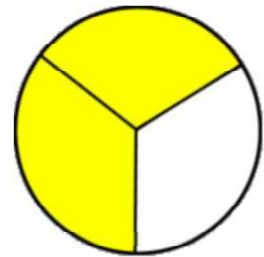
$$\frac{1}{2}$$



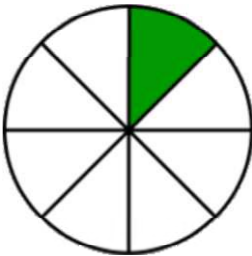
$$\frac{1}{4}$$



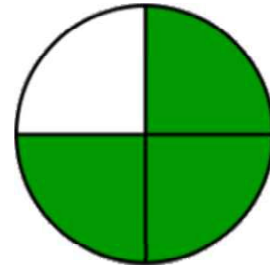
$$\frac{1}{6}$$



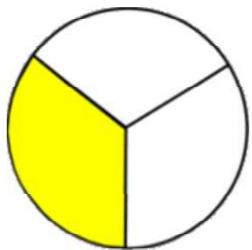
$$\frac{2}{3}$$



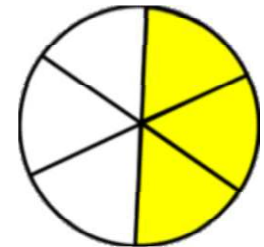
$$\frac{1}{8}$$



$$\frac{3}{4}$$



$$\frac{1}{3}$$



$$\frac{3}{6}$$