









## Estimating time: minutes, hours or days?

### Grade 1 Time Worksheet

Does this activity take minutes, hours or days? Please circle.

<p>Doing homework</p> 	<p>Planning birthday party</p> 	<p>Making a snowman</p> 
Minutes / Hours / Days	Minutes / Hours / Days	Minutes / Hours / Days
<p>Making breakfast</p> 	<p>Making hot chocolate</p> 	<p>Going camping</p> 
Minutes / Hours / Days	Minutes / Hours / Days	Minutes / Hours / Days
<p>Drawing a picture</p> 	<p>Packing and moving</p> 	<p>Eating snacks</p> 
Minutes / Hours / Days	Minutes / Hours / Days	Minutes / Hours / Days

## Answers

<p>Doing homework</p> 	<p>Planning a birthday party</p> 	<p>Making a snowman</p> 
<p>Minutes</p>	<p>Days</p>	<p>Minutes / Hours</p>
<p>Making breakfast</p> 	<p>Making hot chocolate</p> 	<p>Going camping</p> 
<p>Minutes</p>	<p>Minutes</p>	<p>Days</p>
<p>Drawing a picture</p> 	<p>Packing and moving</p> 	<p>Eating snacks</p> 
<p>Minutes</p>	<p>Days</p>	<p>Minutes</p>