









## Estimating time: minutes, hours or days?

### Grade 1 Time Worksheet

Does this activity take minutes, hours or days? Please circle.

<p>Having classes in school</p> 	<p>Brushing Teeth</p> 	<p>Going on a field trip</p> 
Minutes / Hours / Days	Minutes / Hours / Days	Minutes / Hours / Days
<p>Brewing tea</p> 	<p>An overseas trip</p> 	<p>Christmas concert</p> 
Minutes / Hours / Days	Minutes / Hours / Days	Minutes / Hours / Days
<p>Sleep</p> 	<p>Counting from 1 to 20</p> 	<p>Taking a bath</p> 
Minutes / Hours / Days	Minutes / Hours / Days	Minutes / Hours / Days

## Answers

<p>Having classes in school</p> 	<p>Brushing Teeth</p> 	<p>Going on a field trip</p> 
Hours	Minutes	Hours
<p>Brewing tea</p> 	<p>An overseas trip</p> 	<p>Christmas concert</p> 
Minutes	Days	Minutes / Hours
<p>Sleep</p> 	<p>Counting from 1 to 20</p> 	<p>Fixing the roof of a house</p> 
Hours	Minutes	Days