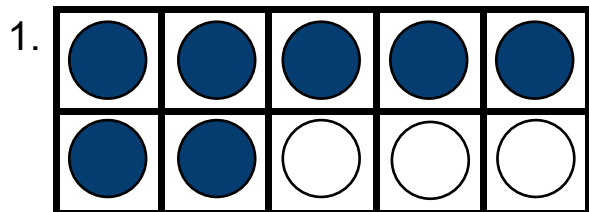


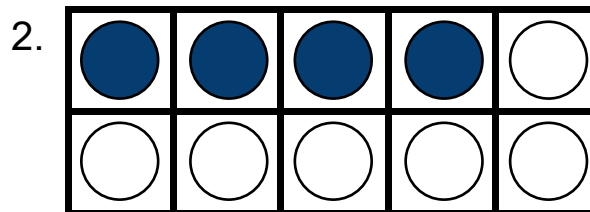
## Making ten with ten frames

### Grade 1 Counting Worksheet

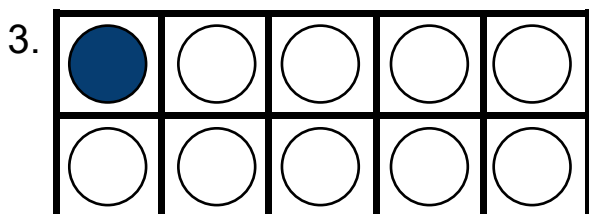
Count the blue and white counters in each frame. Fill in the blanks.



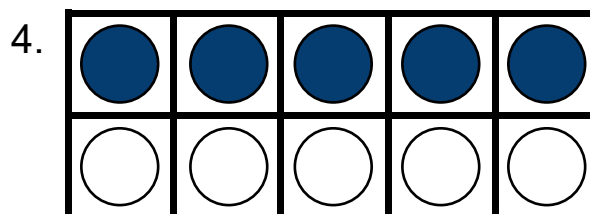
$$\underline{\quad} + \underline{\quad} = 10$$



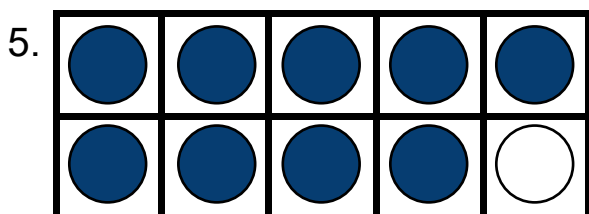
$$\underline{\quad} + \underline{\quad} = 10$$



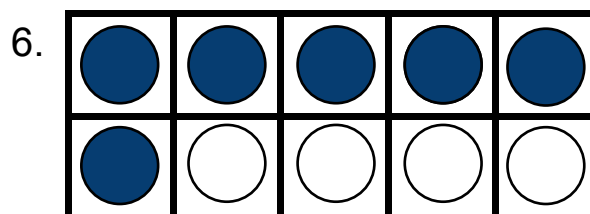
$$\underline{\quad} + \underline{\quad} = 10$$



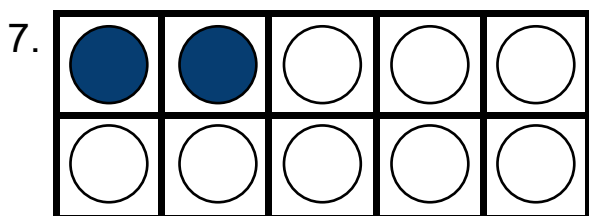
$$\underline{\quad} + \underline{\quad} = 10$$



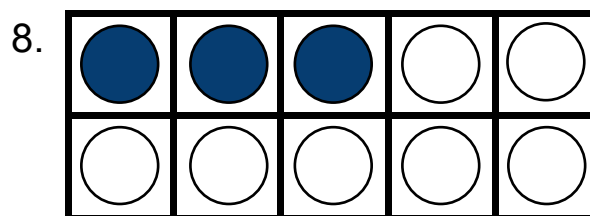
$$\underline{\quad} + \underline{\quad} = 10$$



$$\underline{\quad} + \underline{\quad} = 10$$



$$\underline{\quad} + \underline{\quad} = 10$$

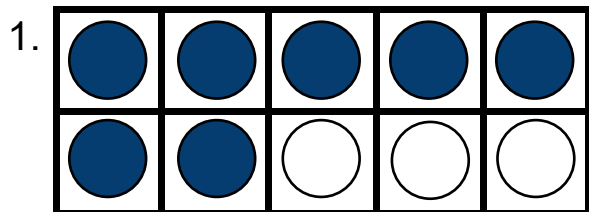


$$\underline{\quad} + \underline{\quad} = 10$$

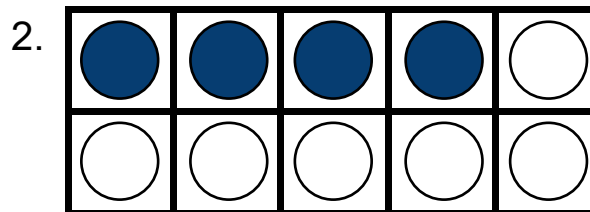
# Making ten with ten frames

## Grade 1 Counting Worksheet

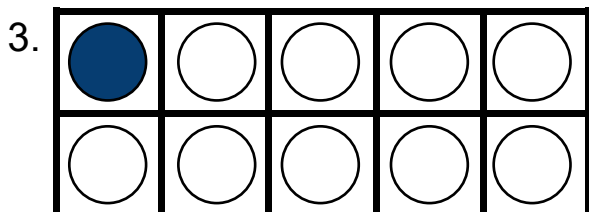
Answers:



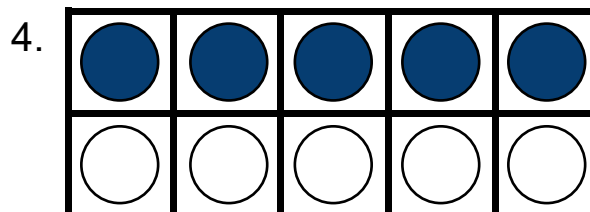
$$\underline{7} + \underline{3} = 10$$



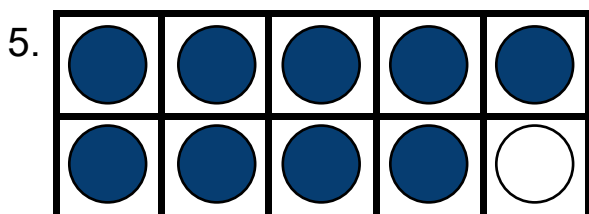
$$\underline{4} + \underline{6} = 10$$



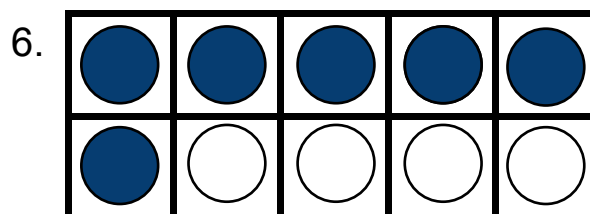
$$\underline{1} + \underline{9} = 10$$



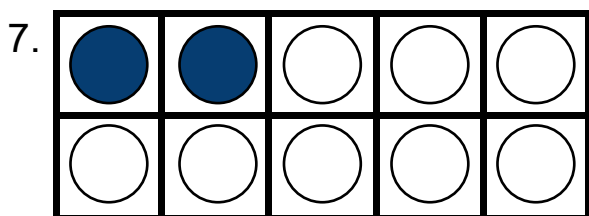
$$\underline{5} + \underline{5} = 10$$



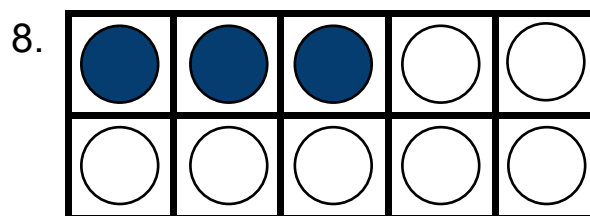
$$\underline{9} + \underline{1} = 10$$



$$\underline{6} + \underline{4} = 10$$



$$\underline{2} + \underline{8} = 10$$



$$\underline{3} + \underline{7} = 10$$