


# Telling time - whole hours (draw the clock)

## Grade 1 Time Worksheet


Draw the time shown on each clock.

1.




6:00

2.




1:00

3.




10:00

4.




5:00

5.




4:00

6.




7:00

7.




12:00

8.



2:00

9.




11:00

# Telling time - whole hours (draw the clock)

## Grade 1 Time Worksheet


Draw the time shown on each clock.

1.




6:00

2.




1:00

3.




10:00

4.




5:00

5.




4:00

6.




7:00

7.




12:00

8.



2:00

9.



11:00