


# Telling time - whole hours (draw the clock)

## Grade 1 Time Worksheet


Draw the time shown on each clock.

1.




11:00

2.




1:00

3.




5:00

4.




6:00

5.




12:00

6.




2:00

7.




3:00

8.



8:00

9.




9:00

# Telling time - whole hours (draw the clock)

## Grade 1 Time Worksheet


Draw the time shown on each clock.

1.




11:00

2.




1:00

3.




5:00

4.




6:00

5.




12:00

6.




2:00

7.




3:00

8.



8:00

9.



9:00