


# Telling time - quarter hours (draw the clock)

## Grade 1 Time Worksheet


Draw the time shown on each clock.

1.




4:15

2.




9:00

3.




11:30

4.




9:45

5.




11:45

6.




5:00

7.




8:45

8.



6:15

9.




1:30

# Telling time - quarter hours (draw the clock)

## Grade 1 Time Worksheet


Draw the time shown on each clock.

1.




4:15

2.




9:00

3.




11:30

4.




9:45

5.




11:45

6.




5:00

7.




8:45

8.



6:15

9.



1:30