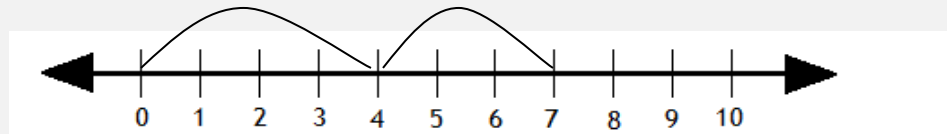


# Addition sentences and number lines

## Grade 1 Addition Worksheet

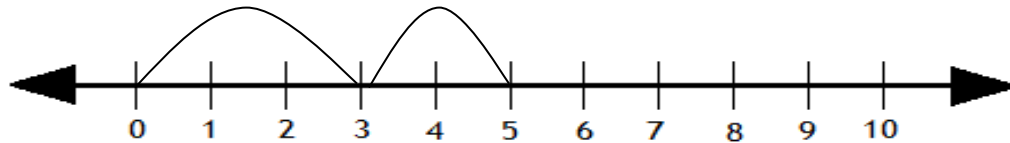
Write the addition sentence using the number line.

**Example:**



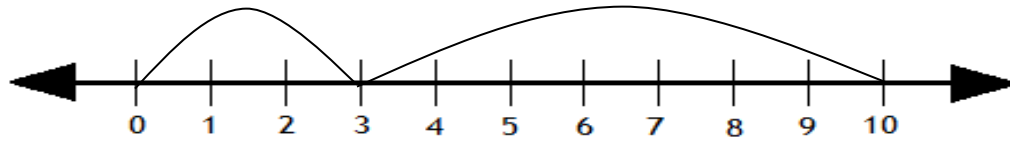
$$\boxed{4} + \boxed{3} = \boxed{7}$$

1.



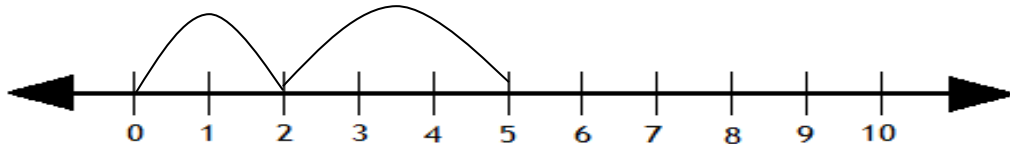
$$\boxed{\phantom{0}} + \boxed{\phantom{0}} = \boxed{\phantom{0}}$$

2.



$$\boxed{\phantom{0}} + \boxed{\phantom{0}} = \boxed{\phantom{0}}$$

3.



$$\boxed{\phantom{0}} + \boxed{\phantom{0}} = \boxed{\phantom{0}}$$

4.



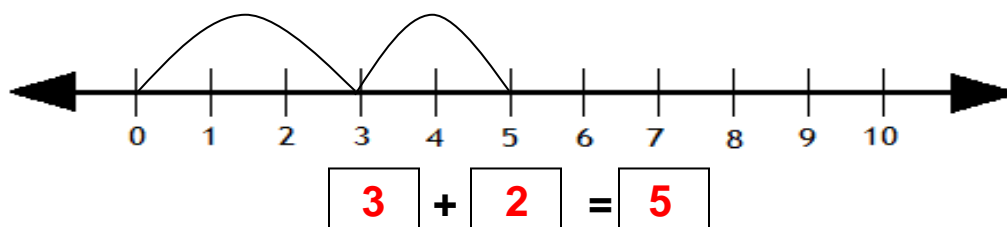
$$\boxed{\phantom{0}} + \boxed{\phantom{0}} = \boxed{\phantom{0}}$$

## Addition sentences and number lines

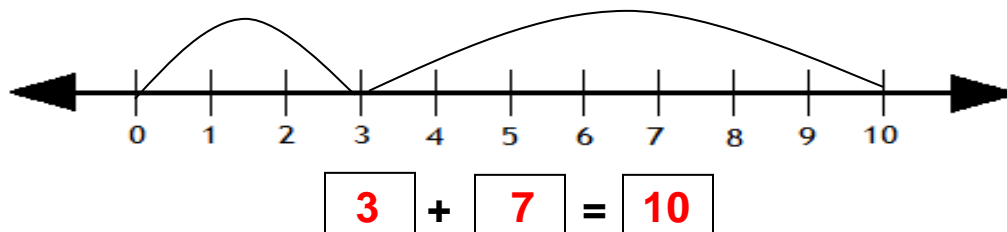
### Grade 1 Addition Worksheet

### Answers

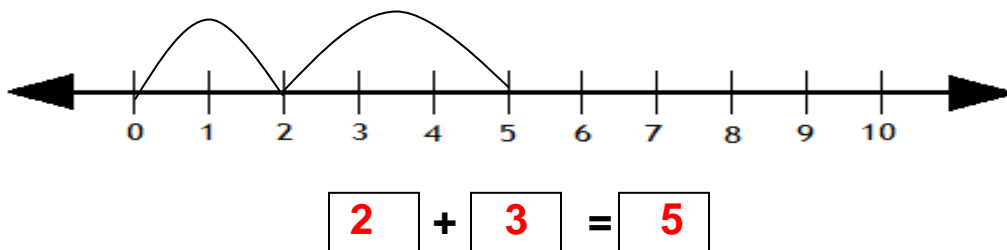
1.



2.



3.



4.

