



Measuring lengths in centimeters using a ruler

Grade 1 Measurement Worksheet

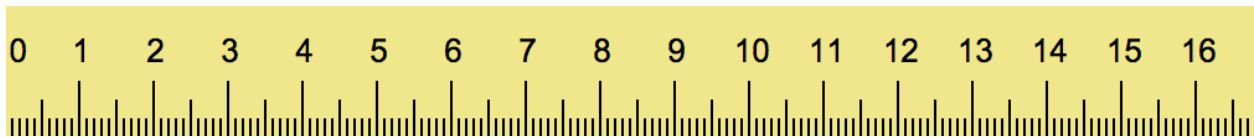
Measure the following objects using the ruler provided.



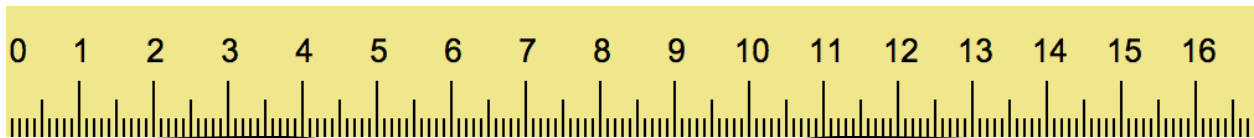
Length: _____ centimeters



Length: _____ centimeters



Length: _____ centimeters



Length: _____ centimeters

Answers

Key: 6 centimeters
Screw: 5 centimeters
Wrench: 11 centimeters
Glasses: 15 centimeters