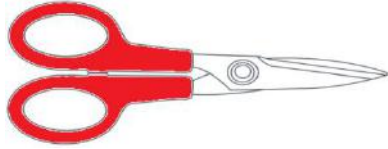



## Measuring lengths in inches

### Grade 1 Measurement Worksheet

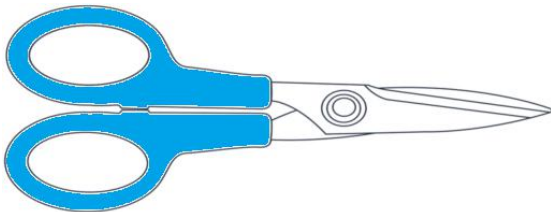
Using the ruler, measure the following pairs of scissors and circle the longest one.



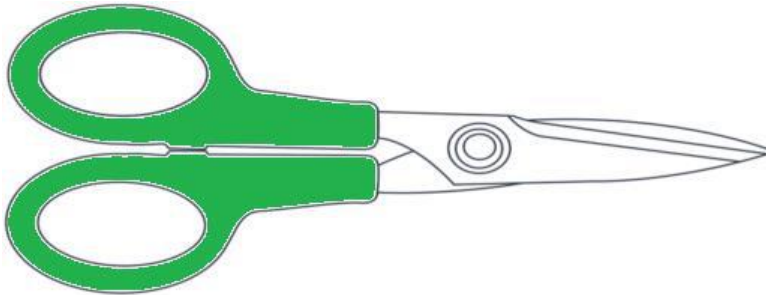
\_\_\_\_\_ inches



\_\_\_\_\_ inches




\_\_\_\_\_ inches



\_\_\_\_\_ inches

----- Cut along this line -----



## Answers

Red: 2 inches  
Black: 5 inches  
Blue: 3 inches  
Green: 4 inches

Longest pair – black