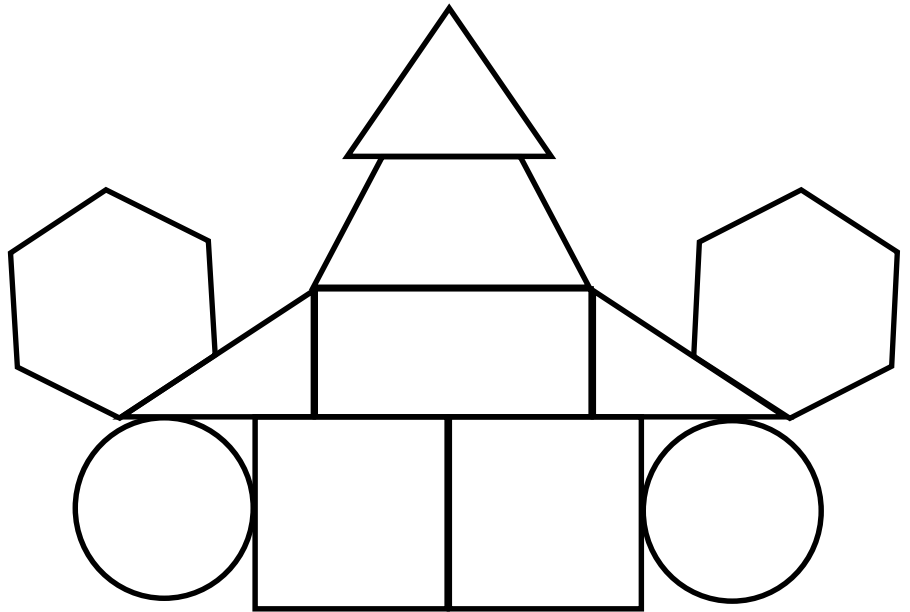


Identifying and describing shapes

Grade 1 Geometry Worksheet



Color all the:

- circles **red**,
- squares **blue**,
- rectangles **green**,
- triangles **orange**,
- hexagons **brown**, and
- trapezoids **pink**.




Draw a line from each description to its matching shape:

1.) all 4 sides are the same length



2.) 2 equal short sides and 2 equal long sides


3.) 4 sides, but only 2 are equal



4.) 3 sides

5.) round

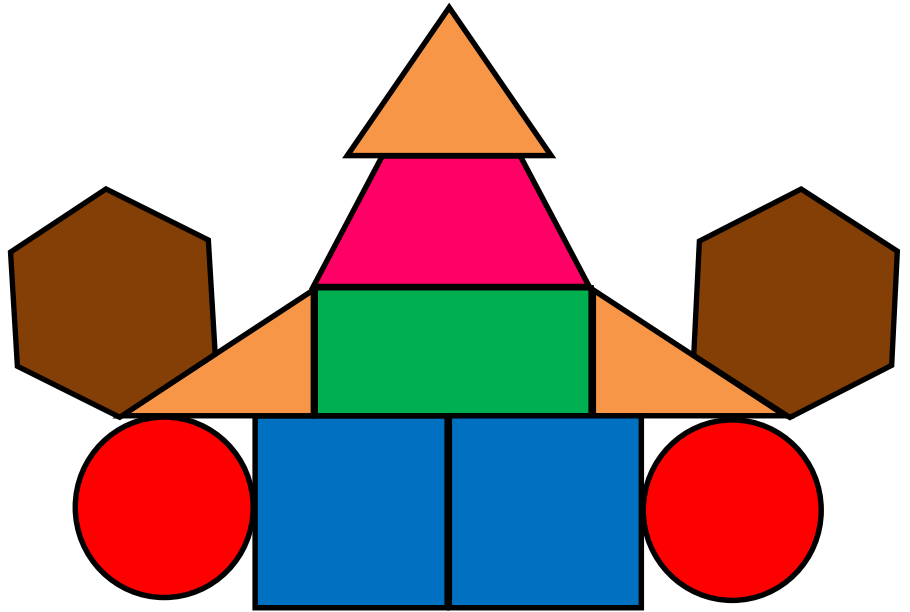
6.) 6 sides



Answers

Color all the:

- circles **red**,
- squares **blue**,
- rectangles **green**,
- triangles **orange**,
- hexagons **brown**, and
- trapezoids **pink**.



Draw a line from each description to its matching shape:

1.) all 4 sides are the same length

2.) 2 equal short sides and 2 equal long sides

3.) 4 sides, but only 2 are equal

4.) 3 sides

5.) round

6.) 6 sides

