

Matching fractions to a picture

Grade 1 Fractions Worksheet

What fraction of each shape is colored? Circle the correct answer.

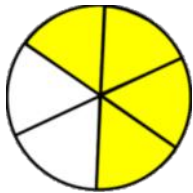


$\frac{3}{8}$

$\frac{4}{8}$

$\frac{6}{8}$

$\frac{7}{8}$

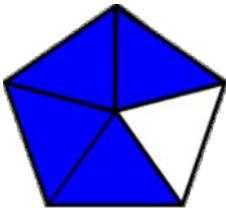


$\frac{4}{5}$

$\frac{4}{6}$

$\frac{4}{7}$

$\frac{4}{8}$



$\frac{2}{3}$

$\frac{3}{4}$

$\frac{4}{5}$

$\frac{5}{6}$

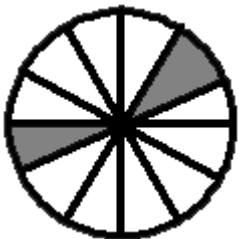


$\frac{3}{4}$

$\frac{3}{8}$

$\frac{5}{8}$

$\frac{3}{6}$



$\frac{2}{10}$

$\frac{3}{10}$

$\frac{4}{12}$

$\frac{2}{12}$



$\frac{3}{5}$

$\frac{1}{5}$

$\frac{1}{8}$

$\frac{1}{10}$

Matching fractions to a picture

Grade 1 Fractions Worksheet

What fraction of each shape is colored? Circle the correct answer.

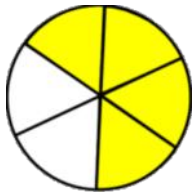


$$\frac{3}{8}$$

$$\frac{4}{8}$$

$$\frac{6}{8}$$

$$\frac{7}{8}$$

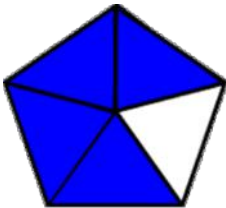


$$\frac{4}{5}$$

$$\frac{4}{6}$$

$$\frac{4}{7}$$

$$\frac{4}{8}$$



$$\frac{2}{3}$$

$$\frac{3}{4}$$

$$\frac{4}{5}$$

$$\frac{5}{6}$$

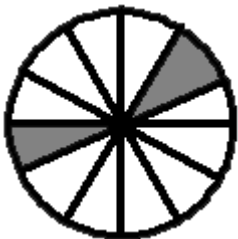


$$\frac{3}{4}$$

$$\frac{3}{8}$$

$$\frac{5}{8}$$

$$\frac{3}{6}$$



$$\frac{2}{10}$$

$$\frac{3}{10}$$

$$\frac{4}{12}$$

$$\frac{2}{12}$$



$$\frac{3}{5}$$

$$\frac{1}{5}$$

$$\frac{1}{8}$$

$$\frac{1}{10}$$