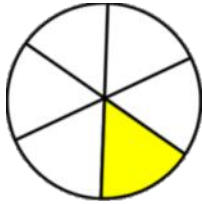


Matching fractions to a picture

Grade 1 Fractions Worksheet

What fraction of each shape is colored? Circle the correct answer.

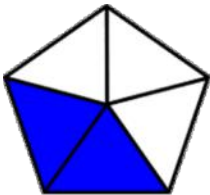


$\frac{1}{4}$

$\frac{1}{2}$

$\frac{4}{7}$

$\frac{1}{6}$

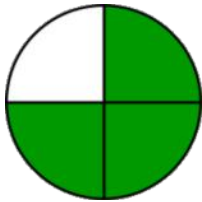


$\frac{1}{2}$

$\frac{2}{5}$

$\frac{2}{8}$

$\frac{1}{5}$

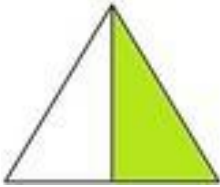


$\frac{1}{4}$

$\frac{2}{4}$

$\frac{3}{4}$

$\frac{4}{4}$

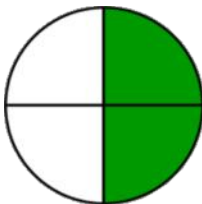


$\frac{2}{3}$

$\frac{2}{6}$

$\frac{1}{3}$

$\frac{1}{2}$



$\frac{2}{4}$

$\frac{2}{3}$

$\frac{1}{8}$

$\frac{1}{4}$



$\frac{3}{3}$

$\frac{1}{10}$

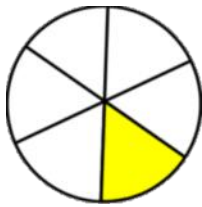
$\frac{5}{6}$

$\frac{4}{8}$

Matching fractions to a picture

Grade 1 Fractions Worksheet

What fraction of each shape is colored? Circle the correct answer.

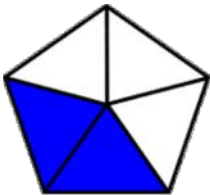


$\frac{1}{4}$

$\frac{1}{2}$

$\frac{4}{7}$

$\frac{1}{6}$

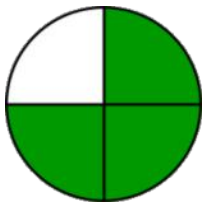


$\frac{1}{2}$

$\frac{2}{5}$

$\frac{2}{8}$

$\frac{1}{5}$

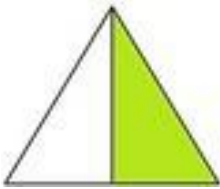


$\frac{1}{4}$

$\frac{2}{4}$

$\frac{3}{4}$

$\frac{4}{4}$

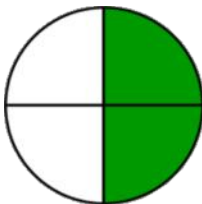


$\frac{2}{3}$

$\frac{2}{6}$

$\frac{1}{3}$

$\frac{1}{2}$



$\frac{2}{4}$

$\frac{2}{3}$

$\frac{1}{8}$

$\frac{1}{4}$



$\frac{3}{3}$

$\frac{1}{10}$

$\frac{5}{6}$

$\frac{4}{8}$