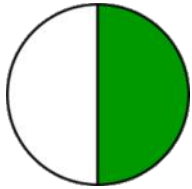


Matching fractions to a picture

Grade 1 Fractions Worksheet

What fraction of each shape is colored? Circle the correct answer.

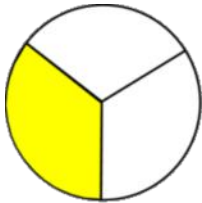


$\frac{1}{4}$

$\frac{1}{2}$

$\frac{4}{7}$

$\frac{1}{6}$

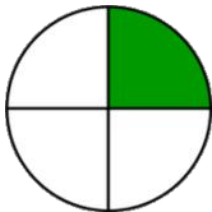


$\frac{1}{2}$

$\frac{1}{7}$

$\frac{1}{3}$

$\frac{1}{4}$

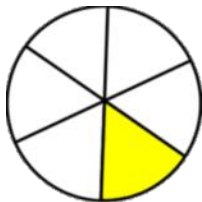


$\frac{1}{4}$

$\frac{2}{4}$

$\frac{3}{4}$

$\frac{4}{4}$

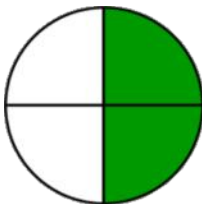


$\frac{1}{3}$

$\frac{2}{6}$

$\frac{2}{3}$

$\frac{1}{6}$

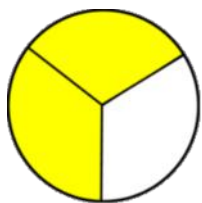


$\frac{2}{3}$

$\frac{2}{4}$

$\frac{1}{3}$

$\frac{1}{4}$



$\frac{3}{3}$

$\frac{1}{6}$

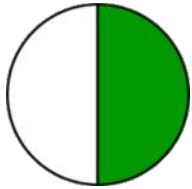
$\frac{1}{3}$

$\frac{2}{3}$

Matching fractions to a picture

Grade 1 Fractions Worksheet

What fraction of each shape is colored? Circle the correct answer.

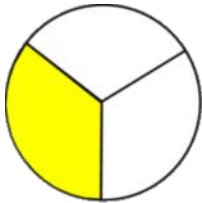


$\frac{1}{4}$

$\frac{1}{2}$

$\frac{4}{7}$

$\frac{1}{6}$

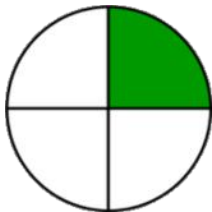


$\frac{1}{2}$

$\frac{1}{7}$

$\frac{1}{3}$

$\frac{1}{4}$

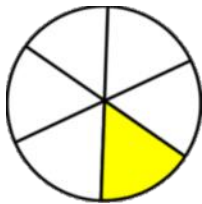


$\frac{1}{4}$

$\frac{2}{4}$

$\frac{3}{4}$

$\frac{4}{4}$

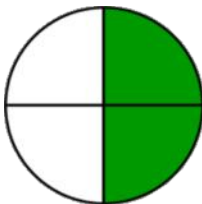


$\frac{1}{3}$

$\frac{2}{6}$

$\frac{2}{3}$

$\frac{1}{6}$

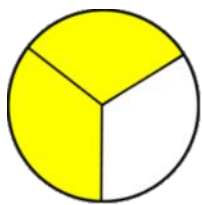


$\frac{2}{3}$

$\frac{2}{4}$

$\frac{1}{3}$

$\frac{1}{4}$



$\frac{3}{3}$

$\frac{1}{6}$

$\frac{1}{3}$

$\frac{2}{3}$