


Elapsed time - whole hours

Grade 1 Time Worksheet


Draw the clock hands to show the time it will be after the number of hours given.

1.




What time will it be in 2 hours 0 minutes?

2.




What time will it be in 2 hours 0 minutes?

3.




What time will it be in 4 hours 0 minutes?

4.




What time will it be in 4 hours 0 minutes?

5.



What time will it be in 3 hours 0 minutes?

6.




What time will it be in 3 hours 0 minutes?

Elapsed time - whole hours

Grade 1 Time Worksheet


Draw the clock hands to show the time it will be after the number of hours given.

1.




What time will it be in 2 hours 0 minutes?

2.



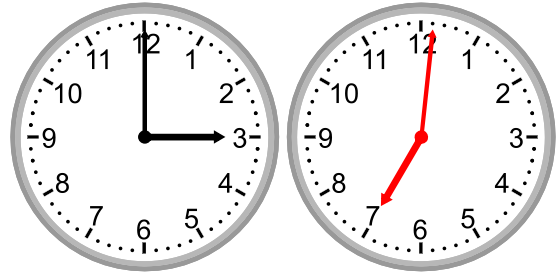
What time will it be in 2 hours 0 minutes?

3.



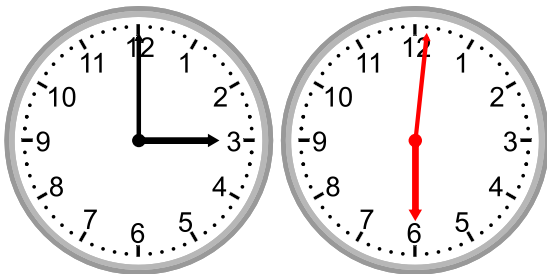
What time will it be in 4 hours 0 minutes?

4.



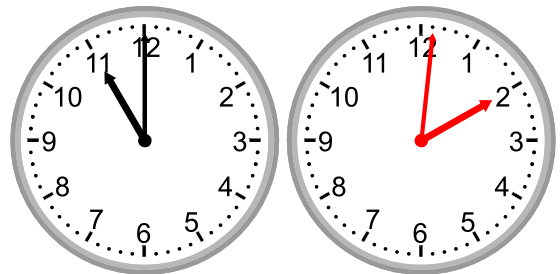
What time will it be in 4 hours 0 minutes?

5.



What time will it be in 3 hours 0 minutes?

6.



What time will it be in 3 hours 0 minutes?