

Counting pennies, nickels, dimes & quarters

Grade 1 Counting Money Worksheet

Add the coins.

1)  = _____

2)  = _____

3)  = _____

4)  = _____


5)  = _____


6)  = _____


Counting pennies, nickels, dimes & quarters


Grade 1 Counting Money Worksheet

Add the coins.

1)  = 37¢ _____

2)  = 26¢ _____

3)  = 31¢ _____

4)  = 31¢ _____

5)  = 55¢ _____

6)  = 62¢ _____